

walcTM 7

**Workbook of Activities
for Language and Cognition**

Everyday Math

**Laurie Bounds Keck
Tonya Kreke Peters**



LinguiSystems, Inc.
3100 4th Avenue
East Moline, IL 61244
800-776-4332

FAX: 800-577-4555
E-mail: service@linguisystems.com
Web: linguisystems.com

Skill Area:	Math Language
Ages:	16 and up

Copyright © 2006 LinguiSystems, Inc.

All of our products are copyrighted to protect the fine work of our authors. Copying this entire book for any reason is prohibited. You may, however, copy the worksheets as needed for your own use with clients. Any other reproduction or distribution of these worksheets is not allowed, including copying this book to use as another primary source or "master" copy.

Printed in the U.S.A.
ISBN 10: 0-7606-0660-9
ISBN 13: 978-0-7606-0660-5

ABOUT THE AUTHORS



Laurie Bounds Keck, M. S., CCC-SLP/L, received her Bachelor's Degree from Augustana College, Rock Island, Illinois, and her Master's Degree from Eastern Illinois University, Charleston, Illinois. She has worked as a speech-language pathologist in a variety of medical settings and recently worked as a part-time clinical supervisor at the University of Illinois. Laurie is currently a stay-at-home mom during the week and provides direct patient care during her weekend rotations at St. Mary's Hospital in Decatur, Illinois.

WALC 7 is Laurie's third publication with LinguiSystems.



Tonya Kreke Peters, M. S., CCC-SLP/L, received her Bachelor's and Master's Degrees from Eastern Illinois University, Charleston, Illinois. Tonya is a speech-language pathologist at St. Mary's Hospital in Decatur, Illinois. She works with patients of all ages in acute care, inpatient and outpatient rehabilitation, long-term care, and home-based therapy.

WALC 7 is Tonya's first publication with LinguiSystems.

Dedication

To my family: Gary, Sam, Abby, and Adam — Laurie

To my husband Thaddeus and our children, Claire and Joseph, who inspire me to achieve my goals. To my parents, Kenneth and Diane Kreke; without their help, I would not be a Speech-Language Pathologist — Tonya

TABLE OF CONTENTS

Introduction	5
--------------------	---

Math

Word Problems with Pictures	6
Word Problems	23

Calendar

General Orientation	28
Sequencing	32
Calendar Questions	36
Daily Planners	40
Weekly Planners	47
Monthly Planners	54
Yearly Planners	61

Time

Telling Time	68
Writing Time on Clocks	71
Word Problems with Pictures	74
Word Problems	92

Money

Identifying Coins	97
Identifying Bills	98
General Questions	99
Determining Coin Values	101
Determining Coin and Bill Values	104
Calculating Coin Values	106
Calculating Coin and Bill Values	108
Word Problems with Pictures	111
Word Problems	128

TABLE OF CONTENTS

Checking

Writing Amounts	133
Writing Checks	135
Writing Deposit Slips	140
Organizing Information	145
Entering Information	152
Balancing Registers	159
Organizing Registers	166
 Answer Key	 173

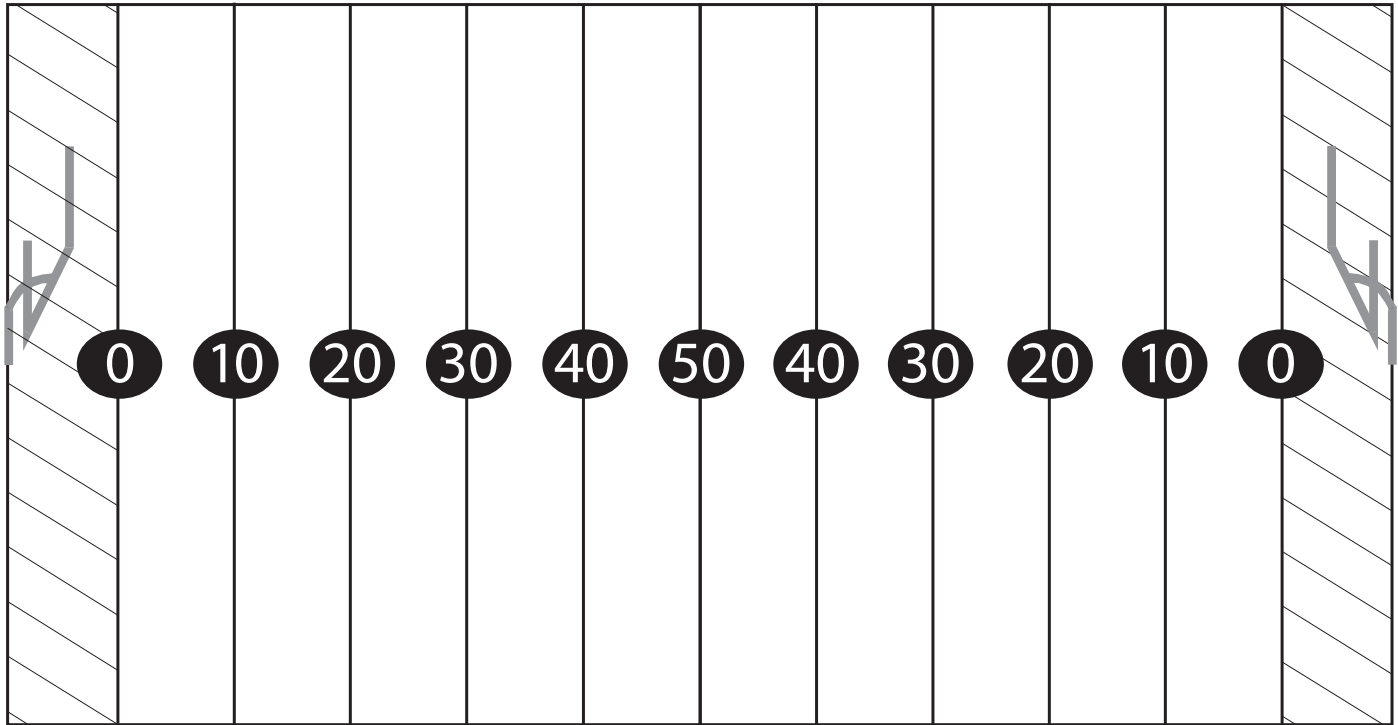
INTRODUCTION

Over the years, we have evaluated and treated numerous adults with neurological impairments. Many were unable to function independently in activities of daily living because they could not complete tasks that involved numbers. Unfortunately, a therapy manual with functional numerical activities covering a wide variety of topics, skill levels, and abilities was not available. This led us to develop *WALC 7*.

Our ideas have been used with adults of all ages, educational experiences, and cultural backgrounds. Activities include word problems, calendar/planner exercises, time, money exchanges, and checkbook register tasks. Each activity was designed to reflect situations that one might encounter during everyday life. Therapists are encouraged to select tasks based upon interest, previous experience, and individualized needs of their patients. In addition, if a patient is accustomed to using a calculator, please have one available.

We hope that you find our therapy manual useful as you help adults who want to regain independence in a world filled with numbers.

Laurie and Tonya



3 feet = 1 yard
12 inches = 1 foot
36 inches = 1 yard

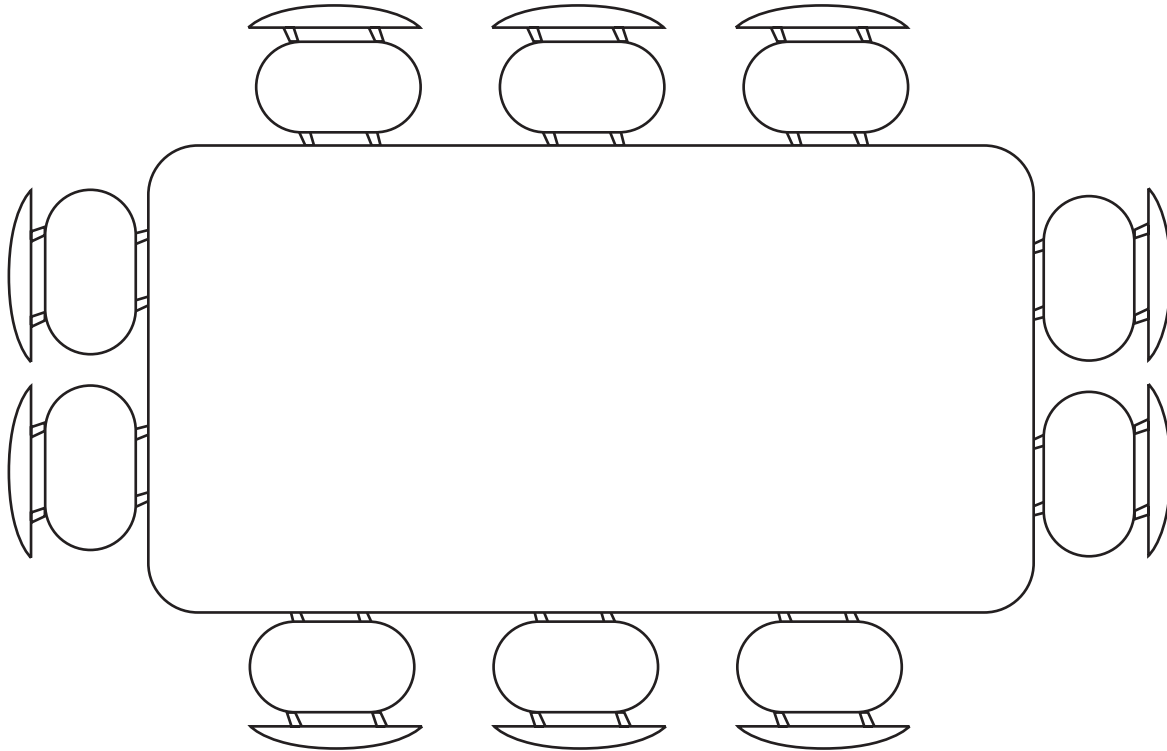
1. A player scored a touchdown after running 30 yards. How many feet did the player run?

2. If a player runs 15 feet, how many yards did the player run? _____
3. A player rushed for a gain of 5 feet. How many inches long was the play? _____
4. How many feet are in an 18-yard run? _____
5. A 37-yard run received a 15-foot penalty. How many yards were ultimately gained on the play? _____

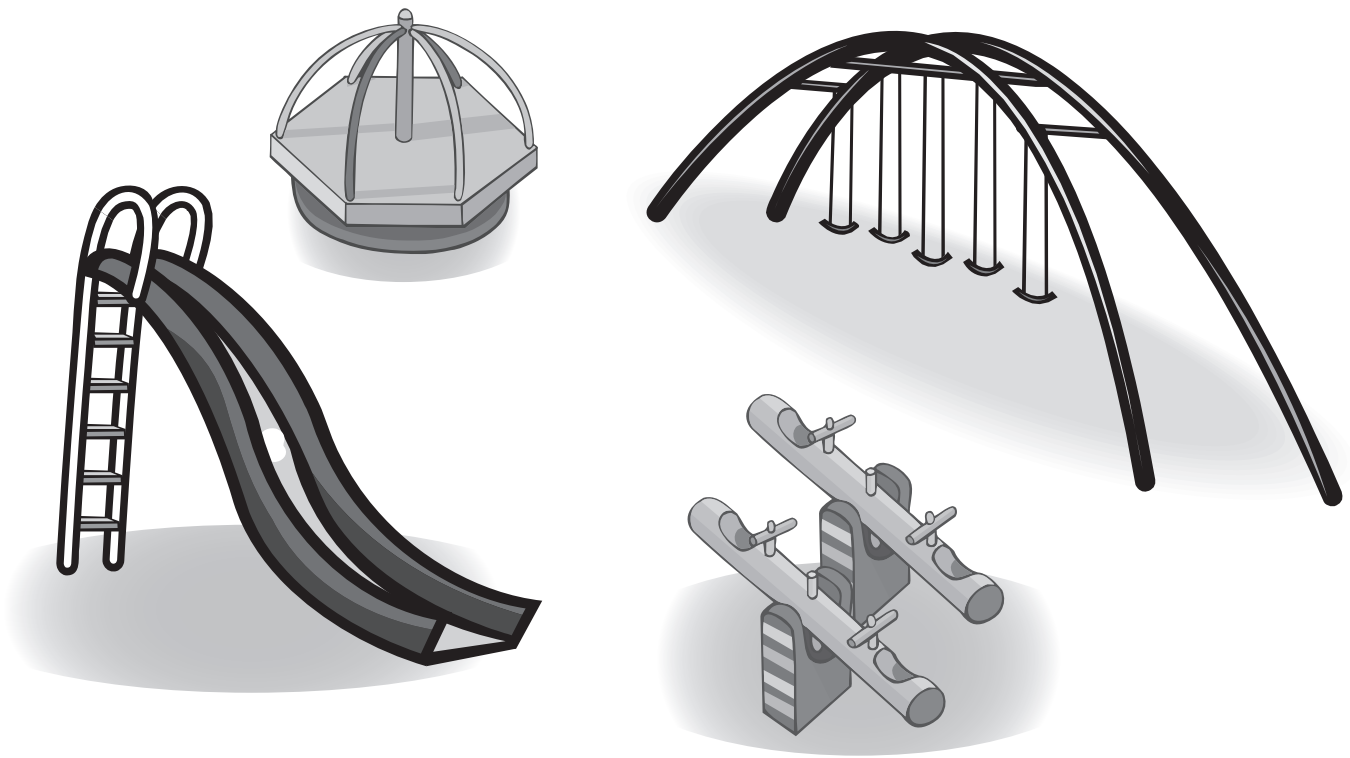
	Chicago, IL	Indianapolis, IN	St. Louis, MO
Aurora, IL	41	220	275
Champaign, IL	138	124	168
Chicago, IL	0	182	296
Dubuque, IA	177	376	307
Indianapolis, IN	182	0	244
Kankakee, IL	60	154	248
Milwaukee, WI	93	279	373
Peoria, IL	157	211	166
Rock Island, IL	169	309	230
St. Louis, MO	396	244	0

- How many miles does it take to travel round-trip from Chicago to Dubuque? _____
- Can you travel from Indianapolis to Milwaukee in under 250 miles? _____
- If you drove from Rock Island to St. Louis, how many miles did you travel? _____
- Is the mileage from Champaign to St. Louis more than the mileage from Peoria to Chicago?

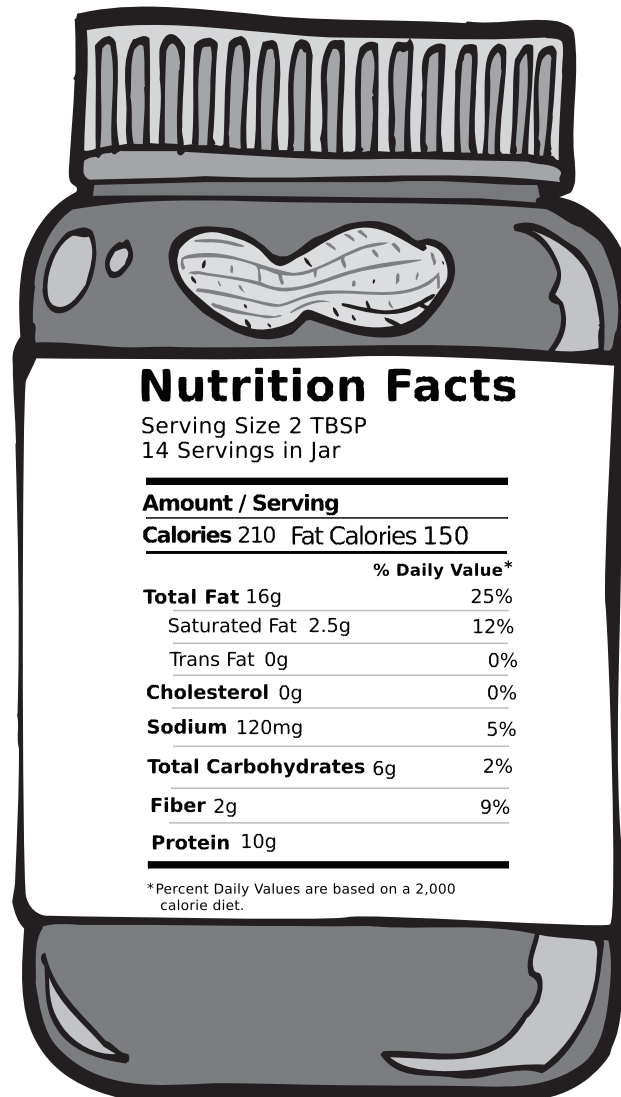
- How many miles is Milwaukee from Indianapolis? _____
- Can you travel round-trip from Kankakee to Chicago in under 100 miles? _____
- Is the distance between Chicago and Indianapolis greater than the distance between Chicago and Rock Island? _____



1. Six people are sitting at the dining room table. How many seats remain? _____
2. Are there enough chairs for 11 people to eat dinner at this table? _____
3. Ten people have gathered for brunch. If there are 3 people in the kitchen working, how many are sitting at the table waiting to eat? _____
4. If 4 couples plan to have dinner together, but 2 couples can't make it, how many people will eat together? _____
5. Is there enough seating at this table for a family of 4 to each invite 3 guests? If not, how many extra chairs will be needed? _____



1. Seven children are on the merry-go-round. Five more join in. How many children are now on the merry-go-round? _____
2. If 3 children are on the swings, how many swings are not occupied? _____
3. All of the swings are currently filled and 4 children are playing on the slides. How many children are on these 2 pieces of playground equipment? _____
4. Six children want to play on the teeter-totters. There is only room for 4 at a time. How many children must wait for a turn? _____
5. If 3 children are on swings, 8 on the merry-go-round, 5 playing on the slides, and 4 on the teeter-totters, how many children are currently at the park? _____



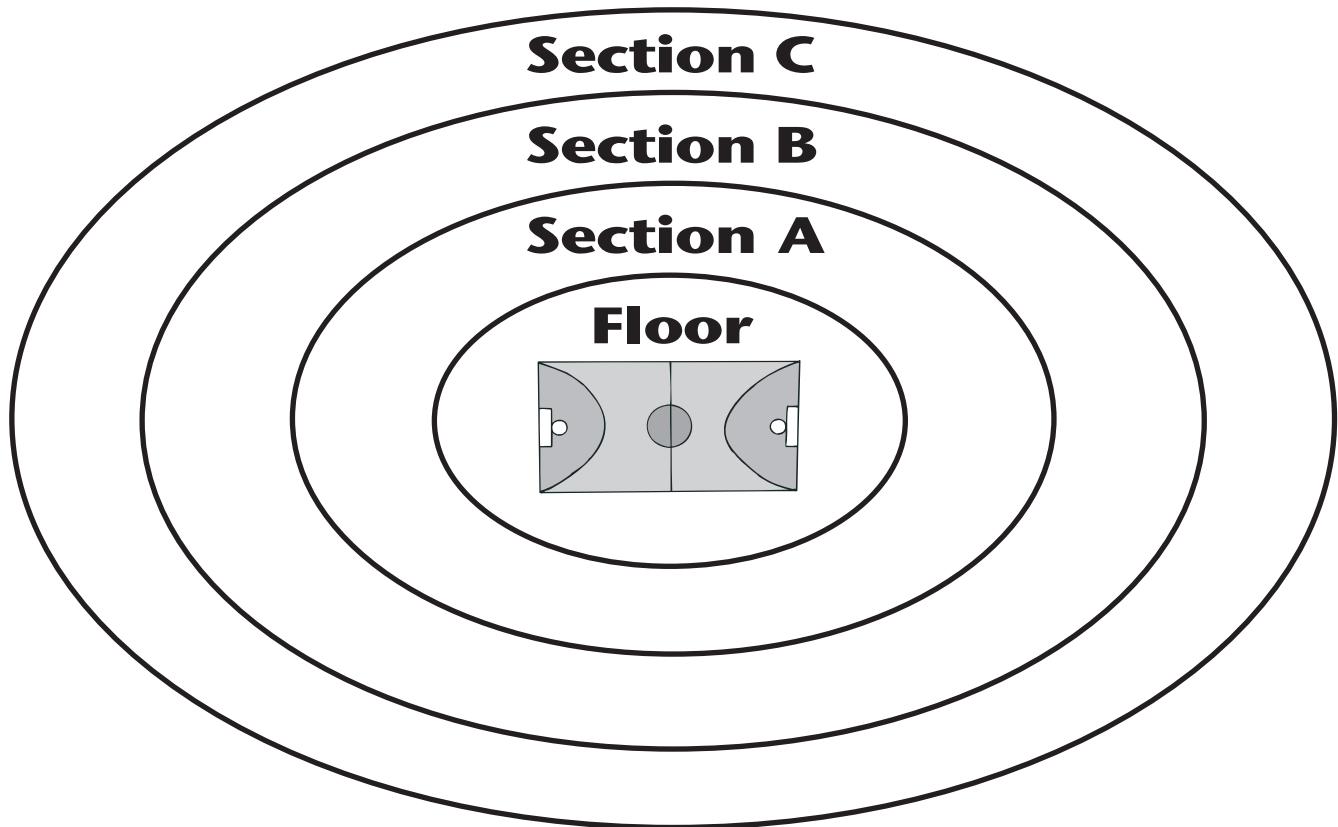
- How many calories are in 2 servings of peanut butter? _____
- What percentage of calories are derived from fat? _____
- If you eat 1 tablespoon of peanut butter, have you consumed 1.25 grams of saturated fat?

- How many more grams of protein are there than fiber? _____
- A cookie recipe calls for 1 cup or 16 tablespoons of peanut butter. Does this jar contain enough servings? _____



24" White Mantle Shelf	\$29.76
36" White Mantle Shelf	\$44.64
24" Black Portland Shelf	\$14.96
36" Black Portland Shelf	\$22.44
48" Black Portland Shelf	\$29.92
10" x 36" Oak Shelf	\$6.98
10" x 36" Maple Shelf	\$6.98
10" x 48" Maple Shelf	\$7.77
12" x 48" Walnut Shelf	\$9.95
16" x 48" Cherry Shelf	\$15.28

1. You purchased 2 36" oak shelves. Will the length of these shelves equal 6 feet? _____
2. How many shelves have a listed depth of 1 foot? _____
3. Will 3 30"-long shelves be more than or less than 1 yard in length? _____
4. What is the center measurement on a shelf that is 48" long? _____
5. What is the difference in length between a 24" shelf and a 36" shelf? _____
6. What is the difference in depth between a 10" x 36" shelf and a 16" x 48" shelf? _____
7. How many inches of shelving are needed for a 10-foot wall? _____
8. Will a 24" shelf and a 48" shelf equal 72" in length? _____

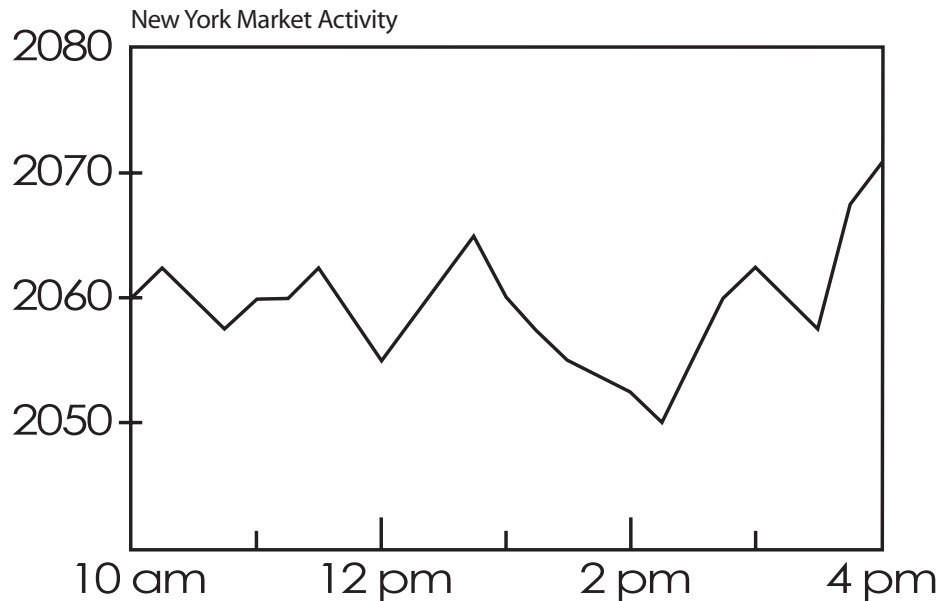


Seating Capacity

Section A	100 seats
Section B	200 seats
Section C	300 seats
Floor	50 seats

- How many more seats are in Section C than in Section A? _____
- 83 people are currently seated in Section A. How many seats remain empty in that section?

- Section B has _____ times more seating than the space reserved for the Floor.
- Is seating capacity in Sections A and B combined equal to that of Section C? _____
- What is the seating capacity of this stadium? _____



Market Closing Levels:

New York Market	10,830.00	+63.77	(+.059%)
European Market	2,071.25	+195.3	(+9.53%)
Select Average	1,210.41	+6.81	(+.057%)
10-year Bond	4.372%	+0.01	

Trading Volume:

New York Volume	1,726,903,000
European Volume	1,976,554,000

1. If the New York Market goes up 10% tomorrow, will it be greater than 11,000? _____
2. What is the difference in volume between the New York Market and the European Market?

3. If the Select Average moves up 150 points, what will be its new value? _____
4. If the European Market gains 175 points tomorrow, will the index increase to 2250? _____
5. If the New York Market loses 1215 points, will it fall below 9500? _____



Area Volleyball Standings

Saturday's Results

Vikings 21
Flames 21
Bears 21

Hornets 19
Panthers 15
Hawks 18

Team	Conference Record		Overall Record	
	W	L	W	L
Thunder	14	0	28	0
Comets	11	2	20	4
Vikings	9	6	19	9
Raiders	8	5	17	7
Bombers	8	5	13	11
Chargers	7	6	18	9
Bears	6	8	14	13
Flames	5	9	17	10
Hawks	4	11	13	16
Hornets	3	11	7	14
Panthers	1	13	7	20

- How many teams are in the area volleyball conference? _____
- Have the Hornets won 11 games this season? _____
- How many non-conference losses have the Thunder had this season? _____
- How many teams have a greater overall winning percentage than losing percentage?

- How many teams have won at least 7 conference games? _____
- Did the Flames win Saturday's game over the Panthers by more than 20 points? _____
- How many more points did the Bears score over the Hawks on Saturday? _____
- Is the Thunder team more than 5 games ahead of the Comets in the overall standings?



1. Your trainer has instructed you to bench press 70 lbs. Since the bar weighs 45 lbs., how much weight do you need to add? _____
2. If you complete 3 sets of 10 dumbbell exercises, how many repetitions have you done?

3. What is the combined weight of 45 lbs., 35 lbs., 10 lbs., and 2.5 lbs.? _____
4. You are able to lift a maximum of 80 lbs. You need to lift 25% of that weight during your workout. How much weight do you need to lift? _____
5. What is the difference in weight between 2 50-lb. dumbbells and 2 10-lb. dumbbells?



Regular (5'8" – 5'11")

	Small	Medium	Large	X-Large
Neck	14–14½	15–15½	16–16½	17–17½
Chest	34–36	38–40	42–44	46–48
Sleeve	32½–33	33½–34	34½–35	35½–36
Waist	28–30	32–34	36–38	40–42

Tall (6' – 6'3")

	Small	Medium	Large	X-Large
Neck	14–14½	15–15½	16–16½	17–17½
Chest	34–36	38–40	42–44	46–48
Sleeve	33½–34	34½–35	35½–36	36½–36
Waist	28–30	32–34	36–38	40–42

1. Your son wears regular shirts with a 16-16½ collar. What is his sleeve length? _____
2. What size sweatshirt should you order if you are 6'2" tall and your chest measures 47 inches across? _____
3. Five years ago your waist measured 38". Now you measure 34". How many inches have you lost? _____
4. What is the standard neck measurement for a men's X-Large Tall white dress shirt?

5. How much longer is a Medium Tall shirt sleeve compared to a Medium Regular sleeve?



	Vehicle 1	Vehicle 2	Vehicle 3
Stock #	2699192	2707199	538954
Exterior Color	Green	Silver	Red
Interior Color	Tan	Black	Tan
Mileage	10,542	9,475	11,414
Engine	V-8	V-6	V-8
Valves	3	4	3
Horsepower	355@5750 rpm	280@6200 rpm	300@5750 rpm
Transmission	7-speed auto	6-speed auto	5-speed manual
Wheelbase	95.7 inches	95.1 inches	107.1 inches
Length	160.9 inches	170.4 inches	188.0 inches
Width	70.6 inches	70.9 inches	73.9 inches
Height	50.0 inches	51.0 inches	55.7 inches
Cargo Capacity	9.8 CU FT	9.5 CU FT	9.7 CU FT
0-60	4.5 seconds	5.0 seconds	5.2 seconds
Fuel Capacity	18.5 gallons	16.9 gallons	16.0 gallons
MPG City/Hwy	16/22	20/28	17/25
Range City/Hwy	296/407 miles	338/473 miles	272/400 miles
Warranty	4yrs/50,000 mi	4yrs/50,000 mi	3yrs/36,000 mi

- What is the difference in mileage between Vehicle 2 and Vehicle 3? _____
- How many more miles per gallon does Vehicle 1 get on the highway versus in the city?

- Vehicle 3 can travel approximately 272 miles on 1 tank of gas in the city. How much farther can this vehicle go on the highway when the same amount of fuel is used? _____
- What is the average cargo capacity of the 3 vehicles? _____
- How much larger is Vehicle 3's wheel base than Vehicle 1's? _____



Great Homes Realty

Beautiful new construction at **1925 Akron Lane.**

Total Square Feet 2,653

Age 3 months

of Bathrooms 3.5

Foundation Basement

Exterior Brick/Vinyl

Taxes \$4674

Garage 3-Car Attached

Bedroom #1 14.0 x 14.8

Bedroom #2 11.0 x 13.0

Bedroom #3 11.0 x 13.0

Bedroom #4 11.0 x 11.0

Living Room 10.3 x 13.3

Family Room 15.9 x 22.9

Kitchen 14.0 x 22.4

Dining Room 11.0 x 13.3

Utility Room 6.0 x 14.0

1. If the homeowner adds an additional 400 square feet, would the total square footage then equal 3,000? _____
2. What is the difference in square footage between Bedroom #2 and Bedroom #4? _____
3. How much larger is the family room than the living room? _____
4. What is the square footage of the kitchen? _____
5. How many square feet are in the utility room? _____
6. How many rooms are in this home? _____

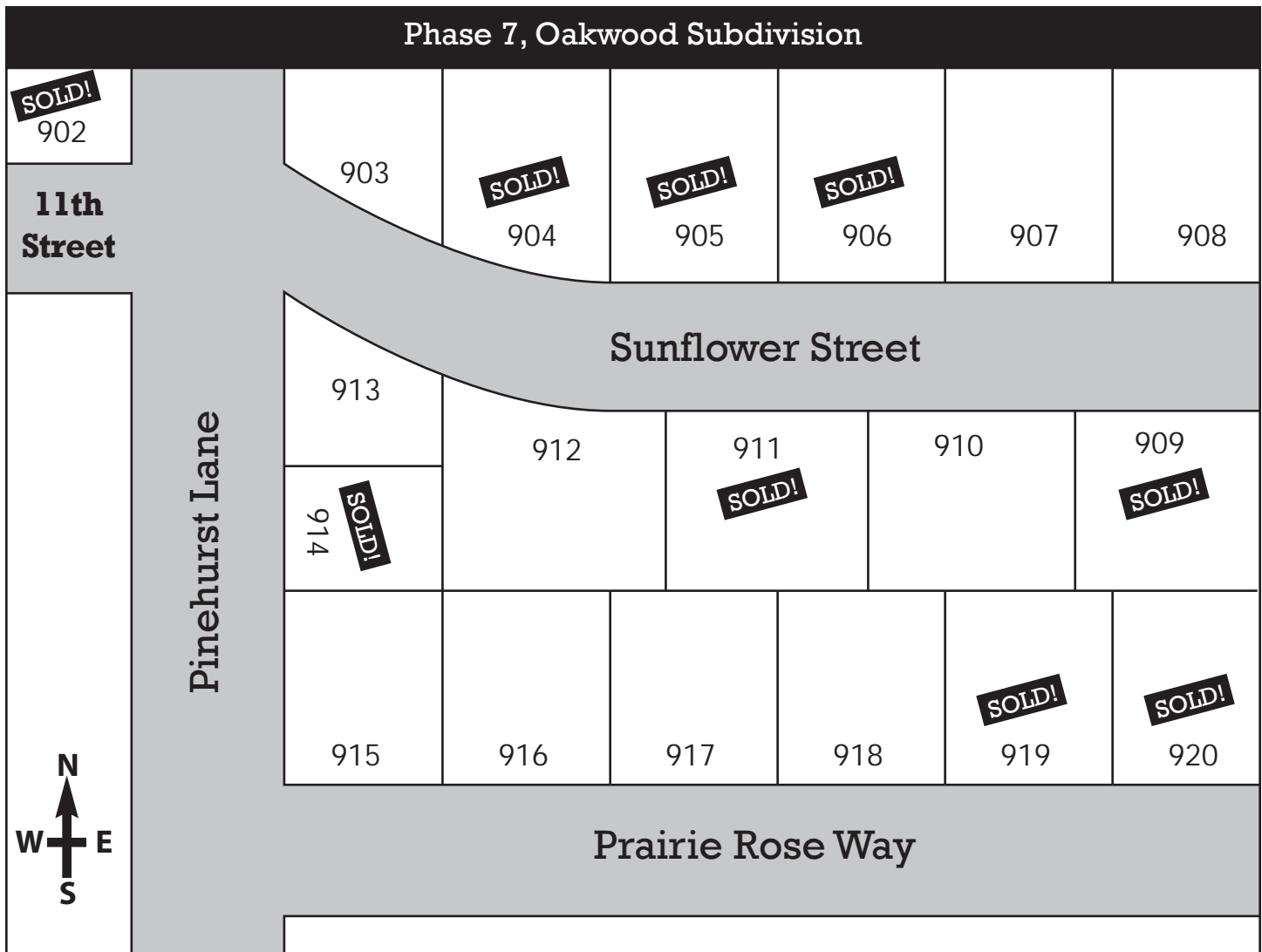


Forecast and Outlook

	Yesterday		Today		Tomorrow		
	Hi	Lo	Hi	Lo	Hi	Lo	
Albuquerque	49	34	52	32	56	30	clear
Boise	54	31	55	31	50	34	cloudy
Cheyenne	49	21	43	24	41	19	cloudy
Dayton	39	32	42	20	36	34	snow
El Paso	57	40	59	40	63	37	clear
Honolulu	81	72	81	67	82	65	clear
Key West	76	70	81	69	78	70	cloudy
Little Rock	59	36	51	42	53	37	cloudy
Memphis	65	35	55	42	50	40	cloudy
Nashville	61	28	55	38	46	41	cloudy
Omaha	56	23	42	36	31	20	snow
Providence	35	13	33	18	36	17	cloudy
Seattle	47	36	56	38	52	42	rain
Topeka	60	27	48	41	38	23	cloudy
Wilkes-Barre	35	12	32	16	36	16	snow

1. What was the average temperature in Honolulu yesterday? _____
2. How many degrees colder will the high in Omaha be tomorrow than it is today? _____
3. How many degrees above freezing will the high temperature be in Providence tomorrow?

4. What is the difference between the low temperature in Dayton today and the forecasted low for tomorrow? _____
5. What is the temperature difference between yesterday's high and tomorrow's forecasted low in Topeka? _____
6. How many cities had a high temperature below 50 degrees yesterday? _____



- How many lots are in Phase 7 of this subdivision? _____
- How many lots are currently available? _____
- What percentage of lots on Sunflower Street have already been sold? _____
- If your neighbors at lot 904 have 4 children, and the neighbors at lot 906 have 1 child, how many kids will be moving in next to your new home at lot 905? _____
- How many lots face south? _____

3 teaspoons =	1 tablespoon
4 tablespoons =	$\frac{1}{4}$ cup
5 tablespoons + 1 teaspoon =	$\frac{1}{3}$ cup
8 tablespoons =	$\frac{1}{2}$ cup
12 tablespoons =	$\frac{3}{4}$ cup
16 tablespoons =	1 cup or 8 ounces
2 cups =	1 pint or 16 ounces
4 cups or 2 pints =	1 quart or 32 ounces
8 cups or 4 pints =	$\frac{1}{2}$ gallon or 64 ounces
4 quarts =	1 gallon



1. A recipe calls for $\frac{1}{2}$ cup water and $\frac{1}{4}$ cup of oil. How many total tablespoons of liquid do you need? _____
2. You need 3 tablespoons of sugar, but only have a teaspoon measure. How many teaspoons equal 3 tablespoons? _____
3. How many cups equal 3 pints? _____
4. You need to make 18 quarts of lemonade. Will 4 gallons of water be enough? _____
5. If you have 4 cups of flour and 16 tablespoons of sugar, how many cups of dry ingredients do you have? _____
6. How many tablespoons are in $1\frac{1}{2}$ cups? _____
7. You need $\frac{2}{3}$ cup of juice. How many teaspoons of liquid should you measure? _____
8. Does $\frac{1}{2}$ gallon contain 6 pints? _____



Manufacturer's Maintenance Schedule

Vehicle Mileage

Recommended Maintenance

7,500; 22,500; 37,500;
52,500; 67,500; 97,500;
112,500

Change oil and filter, Check brakes,
Rotate tires, Inspect exhaust system,
Check all fluid levels, Check lights

15,000; 45,000; 75,000;
105,000; 135,000

Change oil and filter, Check brakes,
Check drive belt, Inspect radiator,
Inspect parking brake

30,000; 90,000;
150,000

Change oil and filter, Check brakes,
Tune-up, Check transmission fluid,
Inspect cooling system

60,000; 120,000;
180,000

Change oil and filter, Check brakes,
Inspect ignition, Inspect cooling system

1. Your car currently has 5,328 miles. How many more miles until your vehicle's first scheduled maintenance? _____
2. You drove 125 miles over the recommended 112,500-mile inspection. How many miles are currently on your car? _____
3. How many miles are between the 30,000-mile maintenance check and 150,000-mile inspection? _____
4. If your car has 52,000 miles, how many more miles can you travel until the radiator needs to be inspected? _____
5. Your car has 10,146 miles. Have you gone over the recommended mileage for the parking brake inspection? _____

1. There are 50 seats in the gym bleachers and 35 are already taken. How many seats are left?

2. A baseball player has been at bat 150 times and made 50 hits. What is his batting average?

3. You need to replace your furnace filter every 3 months. 90 days have passed. Is it time for a new filter? _____
4. The doctor's office has 12 people in the waiting room. If 4 are called back to see the nurse, how many are still waiting to be seen? _____
5. You need to do 4 loads of wash every day for 5 days. How many loads will you have completed? _____
6. If a bus holds 65 people and 20 people have already boarded, how many seats are remaining? _____
7. If a tank of gas lasts 5 days in your vehicle, how many times a month will you need to fill it?

8. The battery in your remote control lasts 4 months. How many batteries will you use in 2 years? _____
9. If you drive 65 miles per hour, how many hours will it take you to travel 195 miles? _____
10. If you are 45 years old and your brother is 37 years old, what is the age difference between you two? _____

1. You get paid 2 times each month. How many paychecks will you receive over the course of 6 months? _____
2. You are sponsoring a canoe trip for 12 people. Each canoe holds 3 people. How many canoes do you need to rent? _____
3. An SUV holds 8 people. Six seats are filled. How many empty seats remain in the vehicle?

4. You purchased 10 cans of vegetables. You have 4 cans of corn, 2 cans of green beans, and 1 can of peas. The rest of the cans contain carrots. How many cans of carrots did you buy?

5. Each week your family eats $1\frac{1}{2}$ boxes of graham crackers. How many boxes are eaten in 3 weeks? _____
6. It rained 6 out of 30 days this month. Was it raining 20% of the time? _____
7. A box of detergent will wash 32 loads of laundry. If you wash 4 loads per week, how many weeks will this box last? _____
8. You get 7 e-mails per day. How many e-mails will you receive by the end of the week?

9. A basketball player made 45 out of 100 free-throw attempts. What was his average?

10. You buy a new bottle of ketchup every other month. How many bottles of ketchup do you purchase each year? _____

1. A small casserole serves 4 people. How many casseroles do you need to make in order to feed 16 people? _____
2. A box of your favorite cereal is $\frac{3}{4}$ empty. How much cereal is remaining? _____
3. A bus has a maximum capacity of 75 people. Eleven seats are currently empty. How many people are now riding the bus? _____
4. Your answering machine holds 40 messages. There are currently 28 calls recorded. How many more messages can your machine receive? _____
5. A magazine subscription comes twice a month. How many magazines will you have received in 1 year? _____
6. It rained 1 out of 5 days while you were on vacation. What percentage of days did it rain?

7. You need to refill your dishwasher rinse solution after 100 wash cycles. There have been 62 loads completed. How many more times can you run your dishwasher before you should refill the rinse solution? _____
8. Someone in your home watches 3 hours of TV each night. How many hours of television does this person watch in 2 weeks? _____
9. An exam had 150 questions. You missed 27. How many questions did you answer correctly?

10. You invited 24 people to a birthday party. You received 8 regrets. How many people attended the party? _____

1. You want to plant 30 tulip bulbs this fall. If each flower bed holds up to 6 plants, how many beds will you plant? _____
2. If you receive 30 paid vacation days a year and have already used 11, how many vacation days do you have left? _____
3. A park district course has room for 20 students. Eight people have already enrolled. How many openings remain? _____
4. You have a service clean your home 2 times per month. How many times per year do they come and clean? _____
5. The local football team won the state tournament by a score of 35-21. How many points did the team win by? _____
6. The bathtub is $\frac{1}{4}$ full. What percentage of the bathtub is filled with water? _____
7. You receive 18 birthday cards this year, which is 7 more than last year. How many cards did you get last year? _____
8. You purchase groceries 3 times a week. How many times do you shop for groceries during a 12-week period? _____
9. A box of 42 diapers lasts 1 month. How many diapers will you use in 3 months?

10. How many eggs are in a dozen? _____

1. A laundromat has 20 washing machines and 9 dryers. How many more washing machines than dryers does it have? _____
2. You work 4 days a week. How many days are you scheduled to work within the next 15 weeks? _____
3. The first showing of a movie was attended by 88 people. At the second showing, there were 16 more people in the audience. How many people watched the second showing of the movie? _____
4. A boat holds 9 people. Six people are currently on board. How many seats are vacant? _____
5. There are 75 people signed up for an intramural sports league. Female participants make up 20% of the league. How many males are involved in the league? _____
6. You have 2 Christmas trees. The larger tree has 132 bulbs, while the smaller one has only 78. How many more bulbs are on the larger tree? _____
7. If you bake cookies once every 3 weeks, how many times will you have baked cookies in 9 weeks? _____
8. A train has 47 box cars, 27 flat beds, 30 oil tankers, and a caboose. How many cars are in this train? _____
9. Two out of every 16 vehicles that arrive at the bus terminal are cabs. If 64 vehicles pass through the terminal in a day, how many were cabs? _____
10. You need to take 2 antibiotic pills 3 times a day for 10 days. How many pills will you take in 1 day? _____

Write the months of the year, starting with January.

- | | |
|-------------------|-----------|
| 1. <u>January</u> | 7. _____ |
| 2. _____ | 8. _____ |
| 3. _____ | 9. _____ |
| 4. _____ | 10. _____ |
| 5. _____ | 11. _____ |
| 6. _____ | 12. _____ |

Write the days of the week, starting with Sunday.

- | | |
|------------------|----------|
| 1. <u>Sunday</u> | 5. _____ |
| 2. _____ | 6. _____ |
| 3. _____ | 7. _____ |
| 4. _____ | |

Write the years following 1998 up to the present.

- | | |
|-------------|-------|
| <u>1998</u> | _____ |
| _____ | _____ |
| _____ | _____ |
| _____ | _____ |
| _____ | _____ |
| _____ | _____ |
| _____ | _____ |

1. What year is it? _____
 2. What was last year? _____
 3. What is next year? _____
 4. What year was 3 years ago? _____
 5. What year will it be 5 years from now? _____
 6. How long ago was 1998? _____
 7. How many months are in a year? _____
 8. How many weeks are in a year? _____
 9. How many days are in a year? _____ How many days are in a leap year? _____
-
1. What month is it? _____
 2. What was last month? _____
 3. What is next month? _____
 4. What month was 5 months ago? _____
 5. How many holidays are celebrated this month? _____
 6. How many more months until Memorial Day? _____
-
1. What day of the week is it? _____
 2. What day was yesterday? _____
 3. What day will it be tomorrow? _____
 4. How many more days until the weekend? _____
 5. What day of the week is the 1st? _____
 6. What day of the week is the 15th? _____

CALENDAR

GENERAL ORIENTATION

Match each holiday to the month it is associated with.

_____ 1. January

a. Labor Day

_____ 2. February

b. Memorial Day

_____ 3. March

c. Christmas

_____ 4. May

d. New Year's Day

_____ 5. June

e. Valentine's Day

_____ 6. July

f. Halloween

_____ 7. September

g. St. Patrick's Day

_____ 8. October

h. Thanksgiving

_____ 9. November

i. Independence Day

_____ 10. December


j. Father's Day

Match the season to the months that are associated with it.


- | | |
|-----------------|---------------------------------|
| _____ 1. Spring | a. September, October, November |
| _____ 2. Summer | b. March, April, May |
| _____ 3. Fall | c. December, January, February |
| _____ 4. Winter | d. June, July, August |

Answer these questions about seasons.

1. How many seasons are in a year? _____
2. What season is associated with ice and snow? _____
3. What season is also called Autumn? _____
4. During which season do we celebrate Thanksgiving? _____
5. Which season has April showers? _____
6. During which season does the U.S. celebrate Independence Day? _____
7. Name a winter month. _____
8. What is your favorite season? _____
 Why? _____



MARCH



Sunday	Monday	Tuesday	Wednesday	Thursday	Friday	Saturday
				1	2	
4		6		8	9	10
	12	13	14		16	17 St. Patrick's Day
18		20		22	23	24
	26	27		29	30	31

CALENDAR

SEQUENCING

Write the missing dates on the calendar.



Sunday	Monday	Tuesday	Wednesday	Thursday	Friday	Saturday
			1		3	4
5		7	8	9		11
12	13	14 Flag Day	15		17	
19	20			23	24	25
	27	28	29	30		

CALENDAR

SEQUENCING

Write the missing information on the calendar.





	Monday	Tuesday	Wednesday	Thursday	Friday	Saturday
						1 New Year's Day
	3	4	5		7	8
9	10		12	13	14	
16	Martin Luther King, Jr. Day	18	19	20	21	22
23	24	25		27		29
	31					

August						
Sunday	Monday		Wednesday	Thursday		Saturday
	1	2		4		6
7		9	10	11	12	
	15	16			19	20
21			24		26	
28		30	31			

S		T	W	T	F	
					1	2
	4			7	8	9
10		12	13			16
17				21	22	23
31	25	26		28		

September						
	M	T		T	F	S
				1		3
4			7		9	10
	12	13		15		
18	19		21	22		24
		27	28		30	

<div>  February  </div>						
Sunday	Monday	Tuesday	Wednesday	Thursday	Friday	Saturday
		1	2	3	4	5
6	7	8	9	10	11	12
13	14	15	16	17	18	19
20	21	22	23	24	25	26
27	28	29				

1. What month is it? _____
2. How many days fall on Wednesday this month? _____
3. What day of the week does the 6th fall on? _____
4. If today is the 11th, how many more days until the 20th? _____
5. What dates fall on the first and third Wednesday of the month? _____
6. What day of the week was January 31st? _____
7. Is this a leap year? _____
8. What day of the week does the 24th fall on? _____
9. What is next month? _____
10. Do the first and last days of the month fall on a Monday? _____

Sunday	Monday	Tuesday	Wednesday	Thursday	Friday	Saturday
					1	2
3	4	5	6	7	8	9
10	11	12	13	14	15	16
17	18	19	20	21	22	23
24	25	26	27	28	29	30

- What month is it? _____
- How many days fall on Saturday this month? _____
- What day of the week does the 21st fall on? _____
- If it is the 13th and you have 8 days off from work (not counting the weekend), what day will you return to the office? _____
- Today is the 29th. What was the date 11 days ago? _____
- What will next month be? _____
- You have plans for 2 consecutive Sundays. If your first commitment falls on the 17th, when is your second commitment scheduled? _____
- What is the first day of the week in May? _____
- If today is the 12th, how many more days until the 15th? _____

AUGUST

Sunday	Monday	Tuesday	Wednesday	Thursday	Friday	Saturday
	1	2	3	4	5	6
7	8	9	10	11	12	13
14	15	16	17	18	19	20
21	22	23	24	25	26	27
28	29	30	31			

1. What month is it? _____
2. What will next month be? _____
3. What day of the week does the 14th fall on? _____
4. What is the date of the first Friday this month? _____
5. Is the 31st on a Thursday this year? _____
6. If today is the 18th, how many more days until the 26th? _____
7. What day of the week does the 5th fall on? _____
8. Is the 10th on a Tuesday this year? _____
9. How many days fall on Sunday this month? _____
10. What day of the week does the 8th fall on? _____



Sunday	Monday	Tuesday	Wednesday	Thursday	Friday	Saturday
1	2	3	4	5	6	7
8	9	10	11	12	13	14
15	16	17	18	19	20	21
22	23	24	25	26	27	28
29	30					

1. What month is it? _____
2. How many days fall on Tuesday this month? _____
3. What day of the week does the 9th fall on? _____
4. What dates fall on the second and fourth Friday of the month? _____
5. If today is the 22nd, how many more days until the 25th? _____
6. Is the 7th on a Sunday this year? _____
7. Today is the 3rd. What will the date be 15 days from now? _____
8. What day of the week does the 30th fall on? _____
9. What was the month prior to November? _____
10. What will next month be? _____

Wednesday		
AM	5-6	Lap swim at the indoor pool
	6-7	
	7-8	
	8-9	Drop off kids at school
	9-10	Pick up dry cleaning
	10-11	Meet with Emma
	11-12	
NOON	12-1	Meet Susan at the deli
PM	1-2	Volunteer at the library
	2-3	
	3-4	Pick up kids from school
	4-5	
	5-6	Pick up babysitter
	6-7	Dinner with the Kennedys
	7-8	
	8-9	

- What activities do you have planned before noon? _____

- When will you volunteer at the library? _____
- What time do you need to pick up the children from school? _____
- Are you dropping off or picking up your dry cleaning this morning? _____
- Is the babysitter expecting you at 4:30 p.m.? _____

Friday

Morning

- 7 Meeting with bank president
- 9 Mtg. with Dan Adams
- 10 Meet with supply vendor

Afternoon

- 12 Lunch with VP of Investments
- 1:30 Conference call with New York office
- 3 Executive Board mtg.
- 4:30 Hamilton interview

Evening

- 6 Social hour
- 7 Benefit dinner
- 9 Dance

1. How many meetings or appointments do you have scheduled with individual people today?

2. When is your first meeting? _____
3. What time will the conference call be held? _____
4. What time will you have lunch with the Vice President of Investments? _____
5. Do you have any meetings planned this afternoon? _____
6. What events are planned for this evening? _____

Saturday

7:00 am	Farmer's Market
	Mail letters
7:30 am	Donations to Shelter
8:00 am	Bagel shop
11:30 am	Picnic at park with friends
1-3:00 pm	Wash & vacuum van
	mow grass
	plant flowers
6:00 pm	Ice-cream social

- How many activities do you have scheduled for today? _____
- What errands will you complete before going to the park? _____

- Are you planning on washing your van today? _____
- Will you attend an ice-cream social at 6:00 p.m.? _____
- Are you going to mow the grass before or after you plant flowers? _____
- When will you be going to the post office? _____
- What time do you need to be at the park for a picnic? _____
- Will you be going to the neighbors' for a cookout this evening? _____

1. 7:30 — Eat breakfast
2. 5:00-5:30 — Watch the nightly news
3. 9:45 — Brush teeth before bed
4. Noon — Eat lunch
5. 7:25 — Watch the sunset
6. 6:00-7:00 — Watch favorite a.m. news show
7. 6:00 — Eat dinner
8. 5:30 — Watch the sunrise
9. 2:30 — Pick up the kids after school
10. 12:00 — Watch the local news at noon

Monday	
AM	5-6
	6-7
	7-8
	8-9
	9-10
	10-11
	11-12
NOON	12-1
PM	1-2
	2-3
	3-4
	4-5
	5-6
	6-7
	7-8
	8-9
	9-10

1. 4:30 p.m. — Walk dog
2. 7:45 p.m. — Movie theater
3. 9:15 a.m. — Pick up pictures from photo lab
4. 1:15 p.m. — Lunch with Dan and Carol
5. 7:25 a.m. — Take car in for routine service
6. 10:00 a.m. — Chiropractor appointment
7. 2:00 p.m. — Volunteer at nursing home
8. 5:30 p.m. — Dinner at La Casa
9. 9:30 a.m. — Pick up prescription
10. 9:30 p.m. — Watch favorite comedy show on TV

Tuesday

Morning

Afternoon

Evening

1. Watch TV
2. Exercise
3. Read the newspaper
4. Shop for groceries
5. Go to the library
6. Take a walk
7. Get the oil changed in the car
8. Make medical appointments

Thursday

[illegible]

Day	Month	Date	Year
Morning			
6:00 a.m.			
7:00 a.m.			
8:00 a.m.			
9:00 a.m.			
10:00 a.m.			
11:00 a.m.			
Afternoon			
12:00 p.m.			
1:00 p.m.			
2:00 p.m.			
3:00 p.m.			
4:00 p.m.			
5:00 p.m.			
Evening			
6:00 p.m.			
7:00 p.m.			
8:00 p.m.			
9:00 p.m.			
10:00 p.m.			
11:00 p.m.			

Day	Morning	Afternoon	Evening
Monday		Work 1-4	7 p.m. Music lesson
Tuesday	Work 9-12		
Wednesday		Work 1-4	7 p.m. Music lesson
Thursday	Work 9-12		
Friday		1 p.m. Doctor appt.	
Saturday	8 a.m. Soccer game	Noon-3 Volunteer at food pantry	
Sunday		1-3 p.m. Visit Mom	

1. What days are you scheduled to work? _____
2. Do you have time to meet with your accountant on Wednesday morning? _____
3. Are your music lessons in the morning, afternoon, or evening? _____
4. What day of the week is your doctor's appointment scheduled? _____
5. What plans do you have for Saturday morning and afternoon? _____

CALENDAR

WEEKLY PLANNERS

Answer the questions about the weekly planner.

	Monday	Tuesday	Wednesday	Thursday	Friday	Saturday	Sunday
AM	Buy groceries		9:00 Doctor			10:00 Baseball double-header	
Noon			Lunch with Karen, Lisa, and Stacy		Picnic at Riverside Park		
PM	6:00 Dog training class	5:30 Meeting w/Greg		Return sweater to the mall	7:00 Book club	5:00 Block party	

1. You need to schedule an appointment with the dentist. Which weekday mornings do you have available? _____
2. How many days do you have lunch appointments? _____
3. Are you planning to go to the mall this Wednesday? _____
4. Which days do you have 2 or more events scheduled? _____
5. Do you have busier mornings or evenings this week? _____
6. Who will you be meeting for lunch on Wednesday? _____
7. Will you purchase groceries towards the end of the week? _____

CALENDAR

WEEKLY PLANNERS

Answer the questions about the weekly planner.

<i>Monday</i>	<i>Thursday</i>	
6:30 a.m. — Yearly physical 10-2 — Meet with Linda re: window treatments 3:30 — Dentist	10:30 a.m. — Cleaning service here 1 pm — Home appraisal 3 pm — Pack for trip	
<i>Tuesday</i>	<i>Friday</i>	
6 p.m. — Haircut with Melanie	Travel to Iowa for race	
<i>Wednesday</i>	<i>Saturday</i>	<i>Sunday</i>
10:30 a.m. — Photo shoot w/kids	8 a.m. — 5K race registration	

1. When is your haircut with Melanie? _____
2. What day will you have your home cleaned? _____
3. What day will you pack for your trip? _____
4. Do you have plans for Wednesday afternoon? _____
5. Is your 5K race going to be held on Saturday or Sunday morning? _____
6. How many days do you have 3 or more activities planned? _____

CALENDAR

WEEKLY PLANNERS

Write each activity on its appropriate day in the weekly planner.

1. Work Monday-Friday, 7:30-11:30 a.m.
2. Guitar lesson on Tuesday and Thursday, 6 p.m.
3. John home from college on Friday afternoon
4. Cooking class Wednesday evening at 8:00
5. 3:00 p.m., Monday — appointment with investment broker
6. Clean house Thursday afternoon
7. Shop for groceries after guitar lesson on Thursday
8. Ship package to Aunt Louise Saturday morning

Day	Morning	Afternoon	Evening
Monday			
Tuesday			
Wednesday			
Thursday			
Friday			
Saturday			
Sunday			

CALENDAR

WEEKLY PLANNERS

Write each activity on its appropriate day in the weekly planner.

1. Lunch with Robert — Tuesday at noon
2. 7:30 — basketball game on Friday evening
3. Pottery class Mon/Wed at 10:00 a.m.
4. Volunteer at shelter Saturday morning and afternoon
5. 9:00 a.m., Tuesday — yoga class
6. Go to the mall on Monday afternoon
7. Sunday brunch at 12:00 p.m.
8. Balance checkbook Thursday morning

	Monday	Tuesday	Wednesday	Thursday	Friday	Saturday	Sunday
AM							
Noon							
PM							

CALENDAR

WEEKLY PLANNERS

Write each activity on its appropriate day in the weekly planner.

1. No School Monday — Martin Luther King, Jr. Day
2. 9 a.m., Saturday — SUV to dealership for maintenance
3. Tuesday/Thursday, 7:30 a.m. — Physical therapy
4. 10 a.m., Thursday — Adam to pediatrician
5. Work both days this weekend, 1-3 p.m.
6. Wednesday, 1-2 p.m. — Fence repair
7. Wednesday, 2-3 p.m. — Carpet repair
8. Mon/Tues/Fri, 5:30-6:15 a.m. — Exercise on treadmill

<i>Monday</i>		<i>Thursday</i>	
<i>Tuesday</i>		<i>Friday</i>	
<i>Wednesday</i>		<i>Saturday</i>	<i>Sunday</i>

CALENDAR

WEEKLY PLANNERS

Use the planner to organize
your weekly activities.

Day	Morning	Afternoon	Evening
Monday			
Tuesday			
Wednesday			
Thursday			
Friday			
Saturday			
Sunday			





June						
Sunday	Monday	Tuesday	Wednesday	Thursday	Friday	Saturday
		1 8:30 am Dr. Clark	2 6-7:30 am Exercise	3	4 6-7:30 am Exercise	5 Cookout
6 Vacation	7	8 Matthew's B-day	9	10 Anniversary	11	12
13	14 6-7:30 am Exercise	15 9-12 pm Volunteer at hospital	16 6-7:30 am Exercise	17	18 6-7:30 am Exercise	19 Jan's B-day
20 Father's Day	21 6-7:30 am Exercise	22 5:30 pm Haircut	23 6-7:30 am Exercise	24 1 pm Dog to vet	25 6-7:30 am Exercise	26
27	28 6-7:30 am Exercise Mom's B-day	29 9-12 pm Volunteer at hospital	30 6-7:30 am Exercise			

1. What dates are you scheduled to exercise? _____
2. How many hours are you scheduled to exercise the third week in June? _____
3. How many people are celebrating a birthday this month? _____
4. What day, date, and time is your hair appointment? _____
5. How many hours will you volunteer this month? _____
6. How many days have you allotted for your vacation this month? _____

December						
Sunday	Monday	Tuesday	Wednesday	Thursday	Friday	Saturday
						1 Shopping trip to Chicago
2	3 7:30 pm Photography class	4	5 Hanukkah begins	6	7 Holiday work party	8
9	10 7:30 pm Photography class	11 Karie's B-day	12 6 pm Caroling w/friends	13	14	15 Neighborhood holiday party 7 pm
16 Birthday	17 7:30 pm Photography class	18 Mom & Dad's Anniversary	19	20 Leave for Colorado ski trip	21	22
23	24 Christmas Eve	25	26 Ski trip	27	28	29
30	31 New Year's Eve	Christmas				

1. What day are you caroling with friends? _____
2. When do you leave on your ski trip to Colorado? _____
3. What day of the week is your photography class? _____
4. What days do you have holiday parties to attend? _____
5. Is Karie's birthday on Tuesday, December 4th? _____
6. When is the first day of Hanukkah? _____
7. Does Christmas Day fall on a Monday this year? _____
8. Are you planning to travel to Chicago this month to shop? _____

March Preschool Snack Schedule

Sunday	Monday	Tuesday	Wednesday	Thursday	Friday	Saturday
	1 Jennifer	2 Claire	3 Joseph 	4 Amy	5 Kenny	6
7	8 Ashlee	9 Maeve	10 Johnathan	11 Martel	12 Connor	13
14	15 Jessie	16 Nathan 	17 Diane	18 Sara	19 Trung	20
21	22	23	24	25	26	27
Spring Break — No School						
28	29 Kianna	30 Cage	31 Caleb 			
Mon./Tues. Wed./Thurs. Fri.	Bring cereal or crackers Bring fruit or vegetables Bring cheese or yogurt		 indicates a birthday 100% juice will be provided by the school.			

- What days are birthday parties scheduled? _____
- When is spring break? _____
- What day is Connor bringing snacks? _____
- What type of snack should Maeve bring on the 9th? _____
- What might Diane provide for the snack on his scheduled day? _____
- How many times will the class meet on Thursday this month? _____

CALENDAR

MONTHLY PLANNERS

Write the activities in the appropriate dates in the monthly calendar.

1. March 10 — 10 a.m., doctor appointment
2. March 19 — Charity event, 7 p.m.
3. March 30 — TV repair, 1:45 p.m.
4. March 17 — St. Patrick's Day
5. March 9 — Home inspection, 12:30 p.m.
6. March 6 — Elizabeth's 4th birthday
7. March 13 — 7:30 a.m., eye surgery
8. March 3 — Party at Pam's, 5-7 p.m.
9. March 15 — Dan here to visit
10. March 12 — 8:30 a.m., breakfast with Mom and sisters

March						
Sunday	Monday	Tuesday	Wednesday	Thursday	Friday	Saturday
1	2	3	4	5	6	7
8	9	10	11	12	13	14
15	16	17	18	19	20	21
22	23	24	25	26	27	28
29	30	31				

CALENDAR

MONTHLY PLANNERS

Write the activities in the appropriate dates in the monthly calendar.

1. May 18 — Open House, 2-4
2. May 2 — Pictures at portrait studio, 10 a.m.
3. May 10 — 15-year anniversary
4. May 11 — Mother's Day
5. Every Monday and Wednesday — Exercise class at noon
6. May 5 — Katie and Kellie's 15th birthday
7. May 12 — Dentist, 4 p.m.
8. May 8 — 8 a.m., appt. with builder
9. May 28 — Mom's birthday
10. May 26 — Memorial Day

May						
Sunday	Monday	Tuesday	Wednesday	Thursday	Friday	Saturday
				1	2	3
4	5	6	7	8	9	10
11	12	13	14	15	16	17
18	19	20	21	22	23	24
25	26	27	28	29	30	31

1. Monday & Wednesday — Self-defense, 7-8 p.m.
2. October 3 — Theater
3. October 20 — Change oil in van
4. October 12 — Columbus Day
5. 1st and 3rd Thursday — 10 a.m., Cleaning service
6. October 30 — Daylight Saving Time ends
7. October 1 — Call doctor about test results
8. October 31 — Halloween
9. October 21 — Haircut, 5:30 p.m.
10. October 22-28 — Vacation

October						
Sunday	Monday	Tuesday	Wednesday	Thursday	Friday	Saturday
		1	2	3	4	5
6	7	8	9	10	11	12
13	14	15	16	17	18	19
20	21	22	23	24	25	26
27	28	29	30	31		

CALENDAR

MONTHLY PLANNERS

Use the planner to organize monthly events.

Sunday	Monday	Tuesday	Wednesday	Thursday	Friday	Saturday

Yearly Planner for Preventative Health	
January Screening for skin cancer	July Colonoscopy
February Annual checkup	August Vision exam
March Hearing screening	September Blood pressure check Stress test
April Cholesterol screening	October Cholesterol screening
May Blood pressure check	November Flu shot
June Dentist — cleaning	December Dentist — cleaning

- How many times a year are you scheduled to have your teeth cleaned? _____
- What months will you have your cholesterol screened? _____
- Is your colonoscopy scheduled in June? _____
- What months will you have your blood pressure checked? _____
- When is your annual checkup? _____
- Will you be getting a flu shot this year? _____

Yearly Planner for Birthdays

January <hr/>	May <hr/>	September <hr/> 9/1 Sam 9/9 Fredrick & Laurie 9/11 Cam 9/28 Shontell <hr/>
February <hr/> 2/11 Carol <hr/>	June <hr/> 6/5 Sydney & Glen 6/11 Marco 6/28 Judith <hr/>	October <hr/> 10/4 Cameron 10/12 Vincent <hr/>
March <hr/>	July <hr/> 7/21 Peter 7/27 Sharon <hr/>	November <hr/> 11/8 Mandy 11/9 Juan 11/19 Emerson <hr/>
April <hr/> 4/6 Delaney 4/20 Marguerite 4/28 Tyrell 4/29 Abby <hr/>	August <hr/> 8/1 Gary 8/12 Paulina 8/26 Ellen 8/28 Ralph & Anna <hr/>	December <hr/> 12/11 Karie <hr/>

1. Will Delaney celebrate her birthday in May? _____
2. How many months have 2 people celebrating a birthday on the same date? _____
3. Is Peter's birthday before or after Sharon's? _____
4. Which months have 5 birthdays to celebrate? _____
5. How many months do not have any birthdays listed? _____

Yearly Planner — High School Sports Seasons

	August	September	October	November	December	January	February	March	April	May	June	July
Baseball												
Basketball												
Cross-Country												
Football												
Soccer												
Swimming												
Track (indoor)												
Track (outdoor)												
Wrestling												
Volleyball												

- Which teams begin their seasons in September? _____

- Do any teams practice in July? _____
- How many sport seasons last more than 3 months? _____
- Which sport begins in October and ends in March? _____
- Does the indoor track team begin its season in February? _____
- The soccer team's season occurs during which months? _____

CALENDAR

YEARLY PLANNERS

Write the holidays in the yearly planner under the month that they occur.

1. New Year's Day
2. Lincoln's Birthday
3. Labor Day
4. Hanukkah
5. Halloween
6. Independence Day
7. St. Patrick's Day
8. Mother's Day

9. Veteran's Day
10. Patriot Day
11. Christmas
12. Memorial Day
13. Father's Day
14. Thanksgiving
15. Columbus Day
16. Flag Day

Yearly Holiday Planner

January	July
February	August
March	September
April	October
May	November
June	December

1. Clean gutters — May and November
2. June — Paint house
3. Fertilize lawn — May, June, July, August, September
4. October — Plant spring bulbs
5. Repair roof — April
6. Put out holiday decorations — November
7. Wash windows — March/September
8. May — Plant vegetable garden

January	May	September
February	June	October
March	July	November
April	August	December

1. Property tax — June/September
2. Mortgage — Every month
3. February/August — Life insurance premium
4. Sanitation — Jan/March/May/July/September/November
5. Car payment — Every month
6. Income tax — April
7. June — Car insurance premium
8. Gas/Electric — Every month
9. February/May/August/November — Water
10. Home equity loan — Every month

January	
February	
March	
April	
May	
June	
July	
August	
September	
October	
November	
December	

CALENDAR

YEARLY PLANNERS

Use this organizer to plan yearly events.


January	
February	
March	
April	
May	
June	
July	
August	
September	
October	
November	
December	

TIME


TELLING TIME

Write the time shown on each clock.


1.




2.




3.




4.



5.




6.




7.




8.




9.




10.



11.




12.




1.




2.




3.




4.




5.




6.




7.




8.




9.



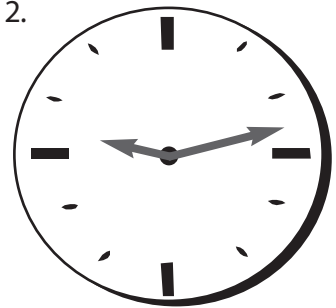
10.



11.



12.




TIME


TELLING TIME

Write the time shown on each clock.


1.




2.




3.




4.




5.




6.




7.




8.




9.




10.



11.



12.




TIME

WRITING TIME ON CLOCKS


Draw the hand positions on the clocks to match the time.

1.




1:00

2.




4:00

3.




7:00

4.




10:45

5.




8:15

6.




2:30

7.




12:10

8.




9:35

9.



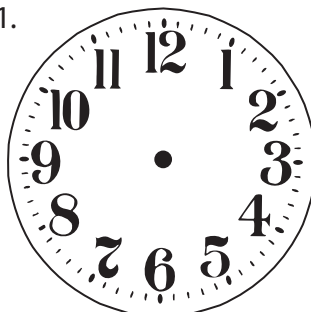
11:40

10.



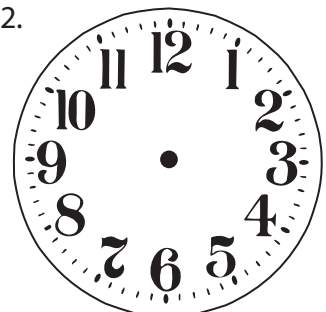
5:27

11.




3:02

12.



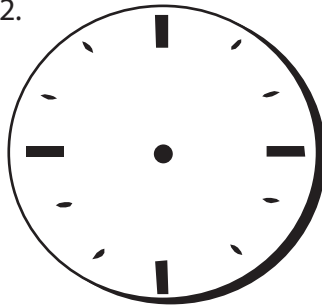
6:52

1.




2:00

2.




5:00

3.



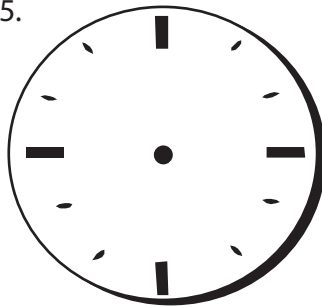
8:00

4.




10:30

5.




11:15

6.



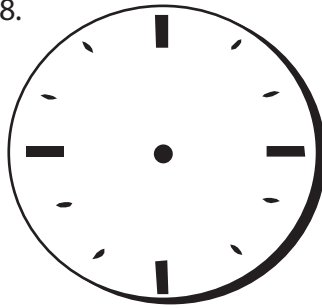
9:45

7.




12:05

8.



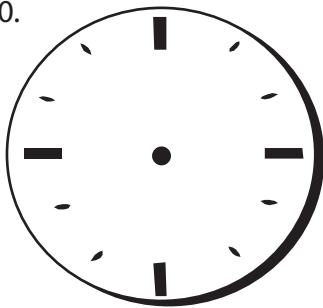
1:35

9.




7:40

10.




4:28

11.



6:17

12.




3:47

TIME

WRITING TIME ON CLOCKS

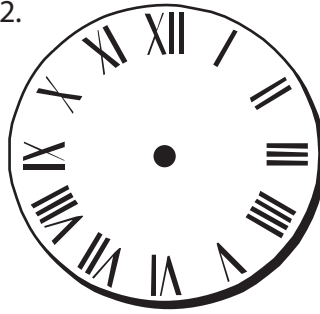
Draw the hand positions on the clocks to match the time.

1.




11:00

2.




6:00

3.




1:00

4.




3:45

5.




10:15

6.




5:30

7.




2:10

8.




7:20

9.




12:55

10.




8:29

11.



4:21

12.



9:06



Susan's Day Out	4:00	7:00	9:30	
County Line Adventure	4:30	7:30	10:00	
Life of a Farmer	3:00	5:00	7:00	
11 Kids and Counting	4:00	7:00	9:00	
Mystery in Springfield	3:30	5:30	7:30	
Sarah's Spirit	2:00	4:00	6:00	8:00
Mother's Day	1:00	3:00	5:00	7:00
Happy K. Parents	12:00	3:00	6:00	9:00

Matinees \$4 before 5 pm • All other times \$6

1. What is the difference in time between the first and third showing of *Sarah's Spirit*?

2. You arrive 25 minutes late to the 7 p.m. show of *11 Kids and Counting*. How much longer must you wait for the next showing of the film? _____
3. How many movie showings begin before 5:00 p.m.? _____
4. The first showing of *County Line Adventure* begins at 4:30. The next show begins at 7:30. Will this movie run more than 3 hours? _____
5. How many matinee show times are available for *Mystery in Springfield*? _____
6. How many movies are scheduled to begin at 3:00? _____




Happy Thanksgiving!



Item	Prep Time	Bake/Cook Time
Turkey and Gravy	30 minutes	5 hours
Dressing/Stuffing	30 minutes	bake in turkey
Green Bean Casserole	5 minutes	40 minutes
Candied Sweet Potatoes	15 minutes	30 minutes
Cranberry Sauce	5 minutes	1 hour
Rolls	0 minutes	10 minutes
Pumpkin Pie	30 minutes	55 minutes

1. You want to eat Thanksgiving dinner at 4:00 p.m. What time should the turkey be put into the oven to make sure that it will be done in time? _____
2. How much prep time will you save by making the sweet potatoes ahead of time?

3. Will it take more than 45 minutes to prepare and bake the green bean casserole? _____
4. How long will it take to bake the pumpkin pie? _____
5. How long will it take to prepare the dressing? _____
6. How many minutes does the cranberry sauce need to cook? _____
7. If you put the rolls in the oven at 3:45 p.m., what time will they be done? _____



MAIN BANK HOURS

3352 W. 3RD ST.

Lobby	Monday-Friday	8 a.m. – 5 p.m.
	Saturday	9 a.m. – Noon
Drive-up	Monday-Friday	7 a.m. – 7 p.m.
	Saturday	7 a.m. – 2 p.m.

WEST BRANCH HOURS

1524 MARIGOLD

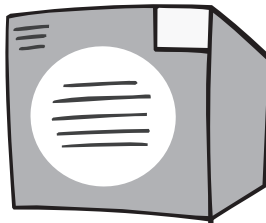
Lobby	Monday-Friday	9 a.m. – 5 p.m.
	Saturday	9 a.m. – Noon
Drive-up	Monday-Friday	7:30 a.m. – 5 p.m.
	Saturday	7:30 a.m. – Noon

24-hour drive-up ATM at both locations

All deposits made after 2 p.m. will be posted at 6 a.m.
the following business day.

1. How many hours is the main lobby open on Monday? _____
2. If you deposit a check at 3:30 p.m., how long will it take for the transaction to be posted?

3. You arrive at the drive-up of the branch bank at 4:45 p.m. on Friday. How many minutes do you have until the bank closes? _____
4. What is the difference in lobby hours between the main bank and the branch during the week? _____
5. How many hours is the drive-up open at the main bank on Saturday? _____
6. Will a deposit made on Saturday at 2:00 p.m. be posted within 24 hours? _____



EXPRESS SHIPPING

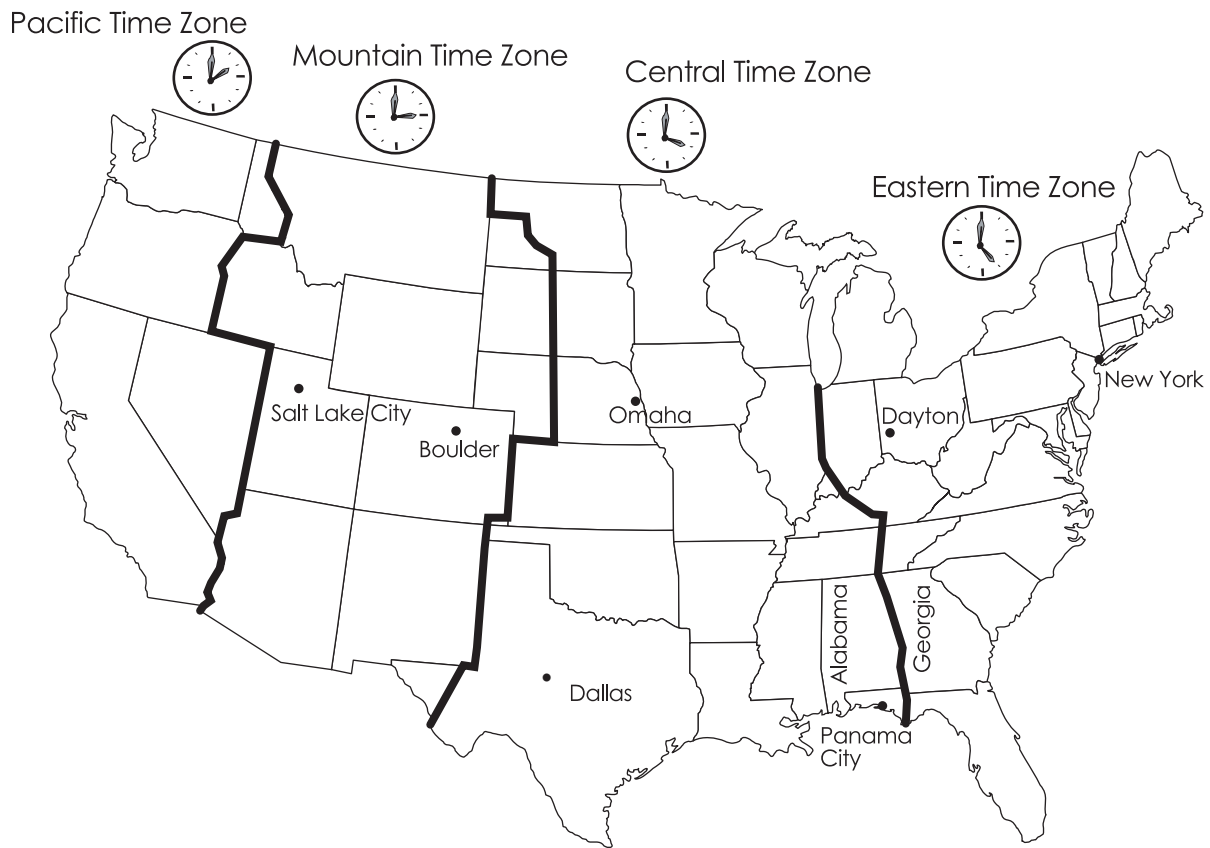
Ship Schedule (Air/Standard Ground)

Drop off by 1:00 p.m.	Next day air delivery by 10:00 a.m.
Drop off by 3:00 p.m.	Next day air delivery by 5:00 p.m. 2nd day air service by 12:00 p.m. 3-day air service by 3:00 p.m. Standard ground service
Drop off after 4:00 p.m.	Monday — Ship Tuesday 10 a.m. Tuesday — Ship Wednesday 10 a.m. Wednesday — Ship Thursday 10 a.m. Thursday — Ship Friday 10 a.m. Friday — Ship Tuesday 10 a.m. Saturday — Ship Tuesday 10 a.m.

No delivery on weekends or holidays

1. You drop off a package at 12:30 p.m. on Tuesday for next day delivery. What time will the package arrive on Wednesday? _____
2. If you drop off a package at 4:30 p.m. on Friday, what time will it ship on Tuesday?

3. What time are 2nd day air shipments received? _____
4. You sent a package to your mother using 3-day air service. If you sent it on Tuesday at noon, when will it arrive on Friday? _____
5. You send a letter using next day air service. If you drop the letter off between 2:45 – 3:00 p.m., what time will it be delivered? _____



1. How many time zones are in the continental United States? _____
2. It is 3:00 p.m. in Omaha, Nebraska. What time is it in Boulder, Colorado? _____
3. Currently it is 1:52 p.m. in Dallas, Texas. What time is it in New York City? _____
4. You need to place an order on the West Coast at noon Pacific Standard Time. Since you are calling from Panama City, Florida, should you dial the telephone at 2:00 p.m. or 3:00 p.m.? _____
5. Are Alabama and Georgia in the same time zone? _____
6. It is 10:54 a.m. in Dayton, Ohio. What time is it in Salt Lake City, Utah? _____

Splish-Splash Pool and Water Park

Main Pool Hours:

Weekdays: 1–5 pm, 6–9 pm

Weekends: 11 am–5 pm, 6–8 pm

Baby/Toddler Pool Hours:

Weekdays: 10 am–12:30 pm

1–5 pm

Weekends: 11 am–5 pm

Adult Lap Swim Hours:

Weekdays: 6–7 am

Noon–1 pm

7–8 pm



Water Park Open Daily from 1–5 pm

Swimming Lessons Available Weekdays 9 am–12:30 pm

Holiday Hours: 10 am–8 pm


1. How many hours is the water park open daily? _____
2. You participate in the morning adult lap swim 3 times per week for $\frac{1}{2}$ hour. How many hours per week do you swim? _____
3. How long is the baby pool open on Wednesday morning? _____
4. If you arrive at the pool at 2:45 p.m., how long can you swim until there is an hour break?

5. How long is the pool open on the 4th of July? _____
6. Do swim lessons last more than 4 hours per day during the week? _____

Monday, September 1st

6:00 a.m.	Wake up/exercise
7:00 a.m.	Get ready/eat breakfast
8:00 a.m.	Begin work
9:00 a.m.	Adams project
10:00 a.m.	Meeting
11:00 a.m.	Meeting (continued)
NOON	Lunch with Claire
1:00 p.m.	Presentation
2:00 p.m.	Presentation (continued)
3:00 p.m.	Meeting
4:00 p.m.	Meeting (continued)
5:00 p.m.	Home
6:00 p.m.	Make dinner and eat
7:00 p.m.	Housework
8:00 p.m.	Relax/watch TV
9:00 p.m.	Relax/watch TV
10:00 p.m.	Go to bed

1. You wake up at 6:00 a.m. How many more hours do you have until you are scheduled to work? _____
2. How many hours were spent in meetings today? _____
3. Did your presentation last more than 1 hour? _____
4. What time did you have lunch with Claire? _____
5. How many minutes did you spend on the Adams project today? _____
6. How many hours did you watch TV before you went to bed? _____

**Cake Mix Pan Sizes & Baking Times**

<i>Pan Size</i>	<i>Bake Time</i>
2 8-inch round pans	30-35 minutes
2 9-inch round pans	25-30 minutes
2 9-inch square pans	25-30 minutes
1 9x13-inch pan	31-36 minutes
1 12-cup tube pan	40-45 minutes
24 cupcakes	15-20 minutes
Oven temperatures	325° (metal or glass pans) 300° (dark or coated pans)

Add 5 minutes to baking time if using a dark pan.

1. You need to make a 2-layer cake. How many minutes will it take if you are using 2 9-inch round pans? _____
2. How many minutes will it take for a tube cake to bake in a dark pan? _____
3. How long will it take to bake a cake in a 9x13-inch pan? _____
4. What is the difference in baking time between 2 8-inch round pans and 2 9-inch square pans? _____
5. Will it take more than 20 minutes to bake cupcakes if your pans are made of metal?



SOUTH SIDE RUNNING CLUB RACE RESULTS



10K

76 Overall Finishers

4.	Fred B.	34:30
7.	Marc D.	36:41
15.	Rob R.	40:10
22.	Randy S.	42:59
44.	Tim N.	48:36
45.	Jeff R.	48:53
53.	Neil H.	59:15
71.	Nathan C.	60:02

5K

195 Overall Finishers


50.	Mike B.	21:47
55.	Sherry B.	22:20
57.	Bob P.	22:24
88.	Sara T.	24:28
98.	Stan S.	24:58
138.	Donna C.	28:42
164.	Olivia H.	32:37

1. How much faster did Fred B. finish the 10K race ahead of Marc D.? _____
2. Donna C.'s previous 5K race results were 29:45. How much faster did she complete today's race? _____
3. What was the difference in time between runners Tim N. and Jeff R.? _____
4. Sherry B. typically runs a 5K in 25 minutes. How many minutes faster was she during today's race? _____
5. How many runners completed the 10K in less than 45 minutes? _____



8:15 a.m. through 11:00 a.m. M/W/F

8:15 - 9:25 a.m.	Free Choice Time
9:25 - 9:30 a.m.	Clean-Up Time
9:30 - 9:55 a.m.	Circle Time
9:55 - 10:00 a.m.	Wash-Up
10:00 - 10:15 a.m.	Snack
10:15 - 10:25 a.m.	Small Group Time
10:25 - 10:55 a.m.	Outside Play
10:55 - 11:00 a.m.	Story Time



- How many hours does this preschool class meet? _____
- How long are the children able to play outside? _____
- What time are the children scheduled to clean up? _____
- How long is story time? _____
- How many minutes late is a child who arrives to school at 8:35 a.m.? _____
- How many minutes do the children have to wash up before they eat a snack? _____
- Small group time is scheduled 3 times a week. How many minutes per week is a child participating in this activity? _____
- When are the children dismissed from preschool? _____




McCarthy Regional Airport

Airline	Flight No.	Arrivals	Departures
North/South Airlines	#502	6:30 a.m.	
Flight — M	#62	6:48 a.m.	
Red/White/Blue	#86		7:18 a.m.
Air Time	#70	8:30 a.m.	
Holiday Airlines	#209	9:45 a.m.	
Air Express Travel	#351		10:00 a.m.

- It is 5:00 a.m. You are waiting for flight #86. How long will you have to wait until it departs?

- It is now 11:00 a.m. You were stuck in traffic and are late picking up friends from flight #209. How long have they been waiting at the airport for you? _____
- What is the difference in arrival time between flight #70 and flight #209? _____
- You are flying on flight #62 and were instructed to arrive 2 hours early to assure enough time for check-in. What time should you be at the airport? _____
- If it is 4:52 a.m. and your flight is scheduled to arrive at the airport at 6:30 a.m., how much longer will you be on the plane? _____



Community
Transit
Authority

Eastern Route Bus

Streets	Pick-up Time	Drop off
Sunset Park & Green	6:00 a.m.	Hospital (7:30 a.m.)
Blue	6:15 a.m.	Business District (7:35 a.m.)
Diane	6:30 a.m.	School Plaza (7:45 a.m.)
T. Scott	6:45 a.m.	Shopping Center (7:50 a.m.)
Tradewinds	7:00 a.m.	Library (8:00 a.m.)

- It takes you 15 minutes to walk to Sunset Park to pick up the bus at 6:00 a.m. If you leave your apartment at 5:30 a.m., how long will you be waiting for the bus? _____
- You board the bus at T. Scott Avenue heading toward the business district. How long will you be riding on the bus? _____
- If it takes you 1 hour and 15 minutes to drive from Green Street to the hospital, would it be faster to take the bus instead? _____
- You and a friend board the bus every morning at Blue Street. You take it to get to your job in the business district, while your friend rides until she reaches the school where she teaches. How long are you both on the bus at the same time? _____
- If you are the first one picked up on the bus route and the last one to be dropped off, how long did your commute take? _____



Subway Schedule

MetroTransport		Rails (Includes am & pm times)			
Line	Street	A	B	C	D
BLUE	LINCOLN	5:20	5:45	6:00	6:20
RED	JEFFERSON	5:30	6:00	6:30	6:45
GREEN	WASHINGTON	5:40	6:15	7:00	7:10
YELLOW	ADAMS	5:50	6:30	7:30	7:35
ORANGE	REAGAN	6:00	6:45	8:00	8:10

- It takes you 25 minutes to commute to work from your home on Lincoln. If you need to begin work at 6:00 a.m., which rail should you take? _____
- If you board the Green Line at 7:00 p.m. and ride to Reagan Street, how long will you have been on the subway? _____
- You meet your friends every Saturday morning at 8:00 for coffee and doughnuts on Reagan Avenue. The coffee house is approximately 15 minutes away from your apartment on Adams. Which rail would get you there the closest to your meeting time? _____
- What is the time difference between the Red line and the Green line on the D rail?

- You need to arrive at work for a 7:00 morning meeting. Your commute will take 30 minutes. If you board the B rail on Lincoln traveling to Adams, will you arrive on time?

Campbell Island – Winston Bay Auto/Passenger Morning Ferry Service

Depart Campbell Island	Day	Depart Winston Bay
5:30 a.m.	Monday – Friday	6:00 a.m.
6:00 a.m.	Monday – Saturday	6:30 a.m.
6:30 a.m.	Monday – Friday	7:00 a.m.
7:15 a.m.	Monday – Friday	7:45 a.m.
8:00 a.m.	Daily	8:30 a.m.
9:30 a.m.	Daily	10:00 a.m.
10:30 a.m.	Daily	11:00 a.m.
11:15 a.m.	Daily	11:45 a.m.
Noon	Daily	12:30 p.m.

- Is there a ferry ride available every day at 6:00 a.m.? _____
- What is the earliest time a ferry leaves for Campbell Island? _____
- A typical ferry ride takes approximately 20 minutes. You need to be at work in Winston Bay no later than 7:30 a.m. Which ferry should you board in order to be on time? _____

- If you miss the ferry departing at 9:30 a.m. from Campbell Island, how long do you have to wait for the next boat? _____
- Does a ferry leave Winston Island at 12:00 p.m.? _____

ITINERARY



Day	Location	Arrival	Departure
1	Ft. Lauderdale	-----	5:00 p.m.
2	At Sea	-----	-----
3	Bahamas	11:00 a.m.	6:00 p.m.
4	At Sea	-----	-----
5	St. Thomas	10:00 a.m.	6:00 p.m.
6	Dominica	8:00 a.m.	6:00 p.m.
7	Barbados	7:00 a.m.	5:00 p.m.
8	Antigua	-----	-----
9	Puerto Rico	7:00 a.m.	1:00 p.m.
10	At Sea	-----	-----
11	At Sea	-----	-----
12	Ft. Lauderdale	8:00 a.m.	-----

1. What time does the ship depart from Ft. Lauderdale? _____
2. Will you be traveling at sea for more than 24 hours after departing Ft. Lauderdale? _____
3. The cruise ship arrives in Puerto Rico at 7:00 a.m. How many hours can you tour the island before you need to return to the ship? _____
4. How many hours will it take to travel from St. Thomas to Dominica? _____
5. Is the ship docked for the same amount of time in Dominica as it is in Barbados? _____

Tentative Convention Schedule**Thursday, June 20**

9:00–11:00 a.m.	Session I — Business
12:15–3:00 p.m.	Session II — Opening Luncheon
3:15–4:00 p.m.	Workshop A
4:15–5:00 p.m.	Workshop B
5:00–6:30 p.m.	Group Photo
6:00–7:00 p.m.	Social Hour
7:00–10:00 p.m.	Session III — Banquet
10:00–11:00 p.m.	President's Reception

Friday, June 21

7:30–8:15 a.m.	Pre-Convention Meeting
8:45–11:30 a.m.	Session IV — Business
12:30–3:00 p.m.	Session V — General Luncheon
3:15–4:00 p.m.	Workshop C
4:00–5:30 p.m.	Program Bureau
5:30–6:30 p.m.	Group Photo
6:30–7:00 p.m.	Social
7:00–10:00 p.m.	Session VI — Business

Saturday, June 22

7:30–8:00 a.m.	Post-Convention Meeting
8:30–10:00 a.m.	Session VII — Business
11:00–2:30 p.m.	Session VIII — Award Luncheon
3:00–4:30 p.m.	Board of Directors Meeting

1. How long will workshops A and B last on Thursday? _____
2. Is the general luncheon scheduled to take more than 3 hours? _____
3. How many hours are members of the Board of Directors expected to spend in a meeting on the last day of the convention? _____
4. Saturday's award luncheon begins at 11:00 a.m. You have a dentist appointment at 3:30 p.m. Will you be able to attend the entire luncheon? _____
5. If you attend Session III and the President's reception, how long will you spend at convention activities Thursday evening? _____

THE DAILY GAZETTE

Delivery and Subscriptions

Madison County
555-5715

Oliver County
555-4097

Home Delivery Deadlines:

Morning Edition7 a.m.

Afternoon Edition5 p.m.

Weekend Edition8 a.m.

Weekday Circulation Hours:

Madison8 a.m. to 7 p.m.

Oliver7 a.m. to 5 p.m.

Weekend Circulation Hours:

Madison6:30 to 11 a.m.

Oliver7 to 10 a.m.

1. What time does the circulation department open on Saturday in Madison County? _____
2. An afternoon edition of the newspaper was delivered to your home at 5:25 p.m. How many minutes past the deadline was your carrier? _____
3. How many hours is the circulation office open on any given weekday in Oliver County?

4. Which circulation department has longer weekend hours? _____
5. If you haven't received your Sunday newspaper by 10 a.m., how many more hours will the circulation department in Madison be open for you to call and request a paper? _____

From	Subject	Date	Time
Leah	FYI: Raffle	2/10	6:57 AM
Anna	Raffle Entry Information	2/10	7:28 AM
Phillip	Re: Cabinet Selection	2/10	10:29 PM
E-Ship	Shipping Confirmation	2/11	9:48 AM
Louis	Fwd: Good Morning!	2/11	11:09 AM
AEK Clothing	\$9.99 Sale	2/14	1:16 AM
Mom and Dad	Hello!	2/15	9:38 PM
Marina W.	Requests	2/15	10:47 PM
Charles	Fwd: [Fwd:(no subject)]	2/16	3:18 AM
Pharmacy	Save \$25 on prescriptions	2/16	4:26 AM

1. What time was the e-mail received from E-Ship? _____
2. Did you receive a reply from Phillip before 8:00 p.m.? _____
3. Which e-mail was received at 1:16 a.m.? _____
4. Did the forwarded e-mail from Charles arrive in the morning or afternoon? _____
5. What time was the e-mail received from Louis? _____
6. After the 6:57 a.m. e-mail was received from Leah, how long did it take for you to get the information about entering the raffle? _____
7. When was the last e-mail received on 2/15? _____
8. How many e-mails were received between 10:00 p.m. and midnight? _____

1. It is 9:00 a.m. You are scheduled to begin work at 9:30 a.m. How long before you have to arrive? _____
2. Your favorite TV show begins at 8:00 p.m. and lasts approximately $1\frac{1}{2}$ hours. What time will the program end? _____
3. The main lobby at the bank closes at 5:00 p.m. The drive-up stays open 2 more hours. What time does the drive-up close? _____
4. Your karate class meets from 7:30 to 8:30 a.m. on Tuesday, Thursday, and Saturday. How many hours per week do you exercise? _____
5. It is 3:25 p.m. You eat dinner at 6:00 p.m. How much longer until you eat? _____
6. Preschool begins at 8:15 a.m. and lasts 3 hours and 15 minutes. What time does the preschool day end? _____
7. It takes a farmer 2 hours to plant 30 acres. How long will it take to plant 90 acres? _____

8. You woke up at 6:30 a.m. after sleeping 9 hours. What time did you go to bed? _____
9. A meeting is scheduled for 4:15 p.m. It is now 3:45 p.m. How many minutes until the meeting begins? _____
10. If a pizza takes 20 minutes to bake, and the oven 5 minutes to preheat, what time should you turn on the oven if you want to eat lunch at noon? _____

1. It is now 5:40 p.m. You need to go to the post office before it closes at 6:00. If it takes you 15 minutes to drive there, will you make it in time? _____
2. You have to give a $3\frac{1}{2}$ -hour presentation. If you begin at 9:30 a.m., when will you be done?

3. Dance class begins at 4:30 p.m. and lasts 45 minutes. What time will class be over?

4. You need to be at work at 8:00 a.m. It takes 45 minutes to commute. When do you need to leave your home? _____
5. It takes $1\frac{1}{2}$ hours to prepare the tractor before going to the field. You want to be in the field by 7:30 a.m. What time do you need to start working on the tractor? _____
6. It takes 40 minutes to wash and dry 1 load of laundry. If you start at 9:20 a.m., what time will you be finished? _____
7. You went to bed last night at 10:30 p.m. and woke up this morning at 6:00 a.m. How many hours of sleep did you get? _____
8. You ran 30 minutes this morning. If you began at 6:17 a.m., what time did you finish?

9. A steak needs to be cooked 7 minutes per side. What will the total cooking time be?

10. You eat dinner at 8:00. It's 7:15 right now. How much time is there before dinner starts?

1. It is 4:27 p.m. Your train leaves the station at 6:00 p.m. If it takes you 10 minutes to get to the train on time, what time should you leave the office? _____
2. It takes 2 hours to prepare dinner. You want to eat at 6:00 p.m. What time should you begin? _____
3. Grocery shopping takes approximately 1 hour. If it is now 2:30 p.m., what time will you be finished? _____
4. It takes 25 minutes to play 1 card game. How many games can you play in 1½ hours?

5. Your flight leaves at 1:10 p.m. You need to be at the airport 2 hours ahead of time. What time should you arrive at the airport? _____
6. It takes 30 minutes to sew 6 Christmas stockings. How long will it take you to complete 15?

7. It takes you 6 hours to get to Cincinnati, Ohio, and you need to be there by noon. When should you leave? _____
8. You are making a turkey for Thanksgiving. It will take 5 hours to bake. If dinner is at 6:00 p.m., when should you put it into the oven? _____
9. You can read 4 articles in 30 minutes. How many articles can you read in 90 minutes?

10. If it takes you 1 hour to get ready and your spouse gets ready in 75 minutes, who takes longer? _____

1. You have speech therapy 3 times a week and physical therapy 2 times per week. Each session lasts 30 minutes. How many hours are you in therapy each week? _____
2. You arrived at the office at 8:30 a.m. and left at 6:00 p.m. How many hours did you work today? _____
3. Your business meeting lasted $1\frac{1}{4}$ hours. It's now 2:30 p.m. What time did the meeting begin? _____
4. It is 10:15 a.m. You need to get groceries and fill the car with gas. If those errands take more than an hour, will you be home before 11:00 a.m.? _____
5. If you need to be at the bus station by 6:45 a.m. and it is now 5:15 a.m., how much longer until you have to be there? _____
6. It takes you 20 minutes to complete your child's bedtime routine. You want her in bed by 7:45 p.m. What time do you need to begin her routine? _____
7. Your haircut typically takes 45 minutes. Today your stylist was done 8 minutes early. How long did your hair appointment last? _____
8. You drove 60 miles in $1\frac{1}{2}$ hours. How many miles per hour did you drive? _____
9. It is 6:35 p.m. The volleyball game starts at 8:00 p.m. How much longer until the game begins? _____
10. It takes you 13 minutes to walk to the post office. How long does it take you to walk there and back home? _____

1. You need to pick up your next door neighbor at 7:00 a.m. to take her to the airport for a morning flight. If it takes you 40 minutes to get ready and 10 minutes to eat breakfast, when should you set your alarm clock to wake up? _____
2. Self-defense class begins at 7:00 p.m. and ends at 8:15 p.m. How long is the class?

3. You left the office at 6:00 p.m. after working a 10-hour day. What time did you arrive at work in the morning? _____
4. Your car needs an oil change. The service station guarantees that it will be done in half an hour or less. It takes them 32 minutes. Were they done on time? _____
5. If you went to the park at 9:00 a.m. and left at noon, how many hours were you there?

6. You arrived at the football stadium 25 minutes late. If the game started at 1:30 p.m., what time did you get to the stadium? _____
7. If you average 56 hours of sleep each week, how many hours of sleep do you get each night? _____
8. You just missed a taxi that passed by your house at 8:15 a.m. At 8:47 a.m. you were able to flag down the next cab to drive by. How long were you waiting for a taxi? _____
9. There are 9 innings in a baseball game. It's the sixth inning. Is the game more than or less than half over? _____
10. You are upgrading the memory in your computer from 256 megs of RAM to 512 megs. How much memory did you add? _____

a.



b.



c.



d.




1. ____ penny
2. ____ nickel
3. ____ dime
4. ____ quarter

MONEY

IDENTIFYING BILLS

Identify the bills.

a.




b.



c.



d.



e.



f.



1. ____ one-dollar bill
2. ____ five-dollar bill
3. ____ ten-dollar bill
4. ____ twenty-dollar bill
5. ____ fifty-dollar bill
6. ____ one-hundred-dollar bill

1. How many pennies are in a nickel? _____
2. How many pennies are in a dime? _____
3. How many pennies are in a quarter? _____
4. How many pennies are in a half-dollar? _____
5. How many pennies are in a dollar? _____
6. How many nickels are in a dime? _____
7. How many nickels are in a quarter? _____
8. How many nickels are in a half-dollar? _____
9. How many nickels are in a dollar? _____
10. How many dimes are in a half-dollar? _____
11. How many dimes are in a dollar? _____
12. How many quarters are in a half-dollar? _____
13. How many quarters are in a dollar? _____
14. How many half-dollars are in a dollar? _____
15. How many one-dollar bills are in \$5.00? _____
16. How many one-dollar bills are in \$10.00? _____
17. How many one-dollar bills are in \$20.00? _____
18. How many one-dollar bills are in \$50.00? _____
19. How many one-dollar bills are in \$100.00? _____
20. How many five-dollar bills are in \$10.00? _____
21. How many five-dollar bills are in \$20.00? _____
22. How many five-dollar bills are in \$50.00? _____
23. How many five-dollar bills are in \$100.00? _____
24. How many twenty-dollar bills are in \$100.00? _____
25. How many fifty-dollar bills are in \$100.00? _____

1. Do 5 pennies equal 1 nickel? _____
2. Do 2 nickels equal 15¢? _____
3. Do 9 pennies equal 1 dime? _____
4. Are 10 dimes equal to 4 quarters? _____
5. Do 8 nickels equal \$1.50? _____
6. Are 2 \$10.00 bills equal to 1 \$20.00 bill? _____
7. Does 1 dime equal 10 pennies? _____
8. Are 5 pennies and 1 quarter equal to 3 dimes? _____
9. Are 9 nickels equal to 2 quarters? _____
10. Are 3 \$10.00 bills equal to 2 \$20.00 bills? _____
11. Do 4 quarters equal 1 dollar? _____
12. Are 25 dimes equal to 10 quarters? _____
13. Are 3 \$20.00 bills equal to \$60.00? _____
14. Do 5 nickels equal 30¢? _____
15. Are 2 \$5.00 bills equal to 1 \$10.00 bill? _____
16. Do 7 dimes equal 75¢? _____
17. Are 10 \$10.00 bills equal to 1 \$100.00 bill? _____
18. Do 8 quarters equal \$2.00? _____
19. Does 1 \$5.00 bill and 6 quarters equal \$6.25? _____
20. Are 3 quarters equal to 7 dimes and 1 nickel? _____
21. Is 1 quarter and 1 nickel equal to 30¢? _____
22. Do 6 nickels equal 3 dimes? _____
23. Are 10 \$5.00 bills equal to 15 \$1.00 bills? _____
24. Do 7 quarters equal \$1.75? _____
25. Are 5 dimes equal to 9 nickels? _____

MONEY

DETERMINING COIN VALUES

Determine the correct coin value.



1. a. 25¢ b. 26¢ c. 27¢



2. a. 15¢ b. 20¢ c. 25¢



3. a. 30¢ b. 10¢ c. 20¢



4. 40¢ b. 46¢ c. 45¢



5. a. 39¢ b. 37¢ c. 31¢



6. a. 80¢ b. 81¢ c. 82¢

MONEY

DETERMINING COIN VALUES

Determine the correct coin value.



1. a. 30¢ b. 35¢ c. 31¢



2. a. 17¢ b. 15¢ c. 12¢



3. a. 32¢ b. 33¢ c. 34¢



4. a. 95¢ b. 90¢ c. 91¢



5. a. 10¢ b. 11¢ c. 12¢



6. a. 87¢ b. 77¢ c. 67¢



1. a. 21¢ b. 20¢ c. 31¢



2. a. 50¢ b. 55¢ c. 45¢



3. a. 45¢ b. 35¢ c. 60¢
4. a. 37¢ b. 36¢ c. 38¢



5. a. 43¢ b. 33¢ c. 42¢
6. a. 85¢ b. 95¢ c. 90¢

MONEY

DETERMINING COIN AND BILL VALUES


Determine the correct money value.



1. a. \$1.05 b. \$1.25 c. \$1.30



2. a. \$3.22 b. \$3.27 c. \$3.28



3. a. \$5.31 b. \$5.32 c. \$5.33



4. a. \$10.71 b. \$11.70 c. \$12.71



5. a. \$25.05 b. \$25.15 c. \$25.50



6. a. \$38.05 b. \$37.00 c. \$37.05

MONEY

DETERMINING COIN AND BILL VALUES

Determine the correct money value.



1. a. \$6.31 b. \$7.31 c. \$5.33



2. a. \$15.15 b. \$16.15 c. \$15.16



3. a. \$20.38 b. \$21.34 c. \$20.40



4. a. \$50.00 b. \$45.49 c. \$49.45



5. a. \$90.55 b. \$90.85 c. \$90.65



6. a. \$202.00 b. \$203.00 c. \$240.10

MONEY

CALCULATING COIN VALUES

Add the coins together
and write their value.



1. _____



2. _____



3. _____



4. _____



5. _____



6. _____

MONEY

CALCULATING COIN VALUES

Add the coins together
and write their value.



1. _____



2. _____



3. _____



4. _____



5. _____



6. _____

MONEY

CALCULATING COIN AND BILL VALUES

Add the coins and bills together
and write their value.



1. _____



2. _____



3. _____



4. _____



5. _____



6. _____

MONEY

CALCULATING COIN AND BILL VALUES


Add the coins and bills together
and write their value.



1. _____



2. _____



3. _____



4. _____



5. _____




6. _____

MONEY

CALCULATING COIN AND BILL VALUES

Add the coins and bills together and write their value.



1. _____



2. _____



3. _____



4. _____



5. _____



6. _____

Moretti's Market

Open daily 8-5
 Sale prices good
 through Saturday



Home-Baked Pizza Stock-up Sale!

canned mushrooms	\$1.59
black olives	\$1.79
pizza sauce	\$1.89
16 oz. pepperoni	\$1.99
Italian seasoning	\$1.99
pizza dough mix (bag)	\$1.09
pre-made pizza crusts	\$2.49
oregano	\$1.99
parsley	\$1.99
parmesan cheese	\$3.49
foil pizza pans	\$1.59
olive oil	\$4.99
anchovies	\$2.49



Fresh Items

sausage
\$3.99/lb

ham
\$3.99/lb

green peppers
2 for \$1.00

32 oz. mushrooms
\$2.89

mozzarella cheese
2 for \$5.00

1. You want to make a homemade pizza. You need 1 bag of pizza dough, 1 can of sauce, fresh mushrooms and mozzarella cheese. Will \$15.00 be enough for your purchase?

2. If you buy 5 cans of black olives for 79¢ a piece and 2 cans of Parmesan cheese at \$3.49 each, how much will you spend? _____
3. Is it cheaper to buy 3 bags of pizza dough or 1 pre-made pizza crust? _____
4. Which costs more per pound, pepperoni or sausage? _____
5. You need to buy a pizza pan in order to make a pizza at home. You also need Italian seasoning and olive oil. Do you need more than \$10.00? _____



University Basketball Ticket Prices

Men's Basketball

\$400 Season (based on availability)
\$25 single game (based on availability)


Women's Basketball

\$100 Season (general public)
\$80 Season (faculty/staff)
\$45 Season (student)
\$10 Reserved (public)
\$8 Reserved (faculty/staff)
\$5 Reserved (student)
\$2 General Admission

20 HOME GAMES THIS SEASON!

1. You teach at this university and are a season ticket holder for both the men's and women's basketball teams. How much money did you spend on tickets this year? _____
2. Is it more money to attend a single men's basketball game or 3 women's games in general reserved seating? _____
3. You plan on attending all of the men's basketball games this year. How much money will you save by becoming a season ticket holder versus purchasing individual tickets to each home game? _____
4. The psychology department is sending all faculty and staff members to a women's basketball game this winter. How much will the department spend on 46 reserved tickets?

5. What is the difference in price between attending 1 men's game and 1 women's general admission game? _____



Hunan Express

Dine-in or Carry-out

Tradewinds Shopping Center

555-2173


Lunch specials served with egg roll and rice.

- | | |
|---|------|
| 1. Chicken Chow Mein or Chop Suey | 6.75 |
| 2. Beef Chow Mein or Chop Suey | 5.75 |
| 3. Sweet & Sour Chicken | 6.75 |
| 4. Chicken & Broccoli | 6.75 |
| 5. Beef & Broccoli | 5.75 |
| 6. Chicken with Vegetables | 6.75 |
| 7. Beef with Vegetables | 5.75 |
| 8. *Kung Pao Chicken | 6.75 |
| 9. *Kung Pao Beef | 5.75 |
| 10. *Kung Pao Shrimp | 7.25 |

*** Hot & Spicy ***

Tax included in all prices

- If you want 2 orders of Kung Pao Beef, will you spend more than \$10.00? _____
- You need to buy lunch for you and your spouse. You order special #3 and #10. Will \$12.00 be enough to pay for your meals? _____
- What would your bill be if you ordered Chicken & Broccoli, Kung Pao Shrimp, and Beef Chow Mein? _____
- How much do specials #1 and #7 together cost? _____
- What would your change be if you purchased Beef & Broccoli and paid with a \$20.00 bill?



Box Office VIDEO

rental and return guidelines

Checkout Day	New Releases – Due back by 3 p.m. on the next day	3-Day Rental – Due back by 3 p.m. on the 3rd day	6-Day Rental – Due back by 3 p.m. on the 6th day
Sunday	Monday	Wednesday	Saturday
Monday	Tuesday	Thursday	Sunday
Tuesday	Wednesday	Friday	Monday
Wednesday	Thursday	Saturday	Tuesday
Thursday	Friday	Sunday	Wednesday
Friday	Saturday	Monday	Thursday
Saturday	Sunday	Tuesday	Friday

New releases — \$3.50 • 3-day rentals — \$2.50 • 6-day rentals — \$1.50

Late fee — \$2.00 per day

1. If you check out a new release DVD on Tuesday and return it on Friday, what will you end up paying in late fees? _____
2. You checked out 2 3-day rentals and 1 6-day rental. How much did you spend?

3. How much will it cost to rent 3 new release DVDs and 1 6-day video? _____
4. If you spent \$6.00 on late fees, how many days overdue was your video? _____
5. Can you rent a new release and 1 6-day DVD for the same price as 2 3-day rentals?

Everyday Linens

P.O. Box 70503

Providence, RI

Calculate your merchandise total, and then add any of the following that apply:

_____	Merchandise total
+	_____ \$5.00 for gift wrap
+	_____ \$6.00 for each monogram
+	_____ \$10.00 for each personalization
_____	Subtotal
+	_____ Use the chart below for delivery charge.
	\$0 to \$15.00\$4.95
	\$15.01 to \$45.00\$6.00
	\$45.01 to \$65.00\$11.00
	\$65.01 to \$90.00\$14.00
	\$90.01 to \$125.00\$17.00
	\$125.01 to \$200.00\$21.00
	Over \$200.0010%
_____	Total

Add \$15 for Rush Delivery

1. You purchased a birthday gift for your cousin totaling \$25.15. How much will it cost to ship this present? _____
2. It costs \$10.00 to personalize an item. How much money will it cost to have your name added to 4 towels? _____
3. An order total came to \$48.64. How much will it cost to ship this item using Rush Delivery? _____
4. What will your total cost be to purchase a gift for \$56.38 and have it gift wrapped and shipped? _____
5. How much will it cost to add a monogram to a pillow? _____

TSP Hardware Store

3/23 1:40 PM

01	TAPE	141135	4.67
02	NAILS	219351	4.99
03	NAILS	219351	4.99
04	GLOVES	715490	5.99
05	HAMMER	373263	10.78
06	WRENCH	412898	10.78
Subtotal			\$ _____
Tax 7%			\$ _____
Total			\$ _____

ALL RETURNS OR EXCHANGES MUST BE COMPLETED
WITHIN 7 DAYS AND BE ACCOMPANIED BY A RECEIPT

- What is the subtotal of this receipt? _____
- What is the total of this receipt? _____
- If you decided not to buy a hammer, what would your new subtotal be? _____
What would your total be? _____
- How much more expensive is the hammer than a box of nails? _____
- If the gloves were 50% off, how much would they cost before tax? _____

Flash Bulb Portraits

Specializing in Pictures of Children

Package A	Package B	Package C
1 – 8x10	2 – 8x10	3 – 8x10
2 – 5x7	4 – 5x7	6 – 5x7
4 – 3x5	8 – 3x5	12 – 3x5
8 wallets	16 wallets	40 wallets
\$29.95	\$39.95	\$49.95

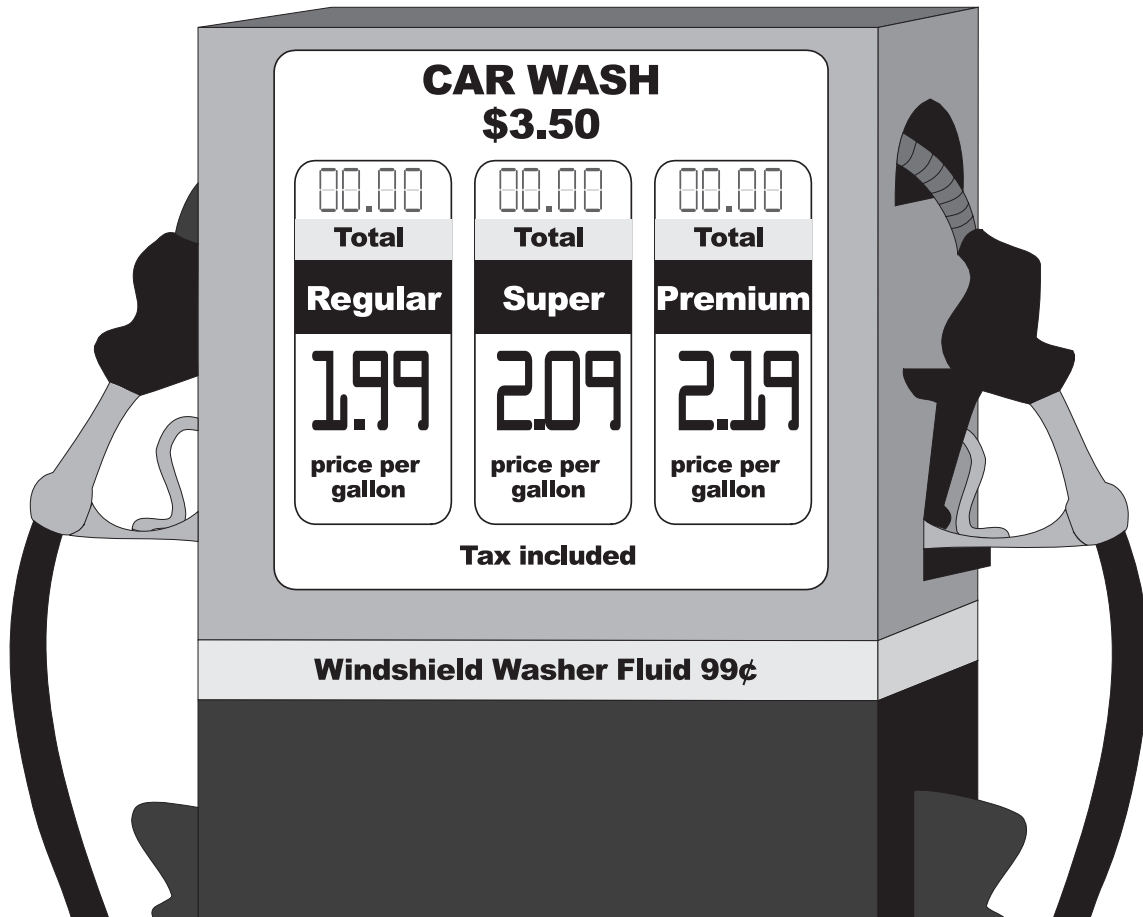
Individual portrait sheets — \$12.95 each

Sitting fees — \$7.95 (1 person), \$15.95 (2 or more)

Super Saver Club membership:
\$30 (no sitting fee for 1 year)

- You want to have a portrait taken of your 3 children. How much will it cost to purchase Package B since you are not a member of the Super Saver Club? _____
- What is the difference in price between portrait packages A and B? _____
- How much money will it cost to purchase a 2-year membership to the Super Saver Club?

- You have decided to purchase Package A with an additional 8x10 portrait. Since you are a current member of the savings plan, what will your total be today at the studio? _____
- This is your first visit to Flash Bulb Portraits. You have decided to buy Package B and pay the individual sitting fee. How much will your photographs cost? _____



1. Your car takes Super gasoline. You have \$20.00. How many gallons of gas can you buy?

2. You purchased 8 gallons of gas for \$15.92. Which grade of gasoline did you use?

3. You need 1 jug of windshield washer fluid and 15 gallons of regular gasoline. Will you spend more than \$20.00? _____

4. How much more expensive is Premium gasoline per gallon than Regular? _____

5. You bought 18 gallons of Super gasoline and a car wash. How much did you spend?

15% Tip Card			
\$1.00	\$.15	\$21.00	\$3.15
\$2.00	\$.30	\$22.00	\$3.30
\$3.00	\$.45	\$23.00	\$3.45
\$4.00	\$.60	\$24.00	\$3.60
\$5.00	\$.75	\$25.00	\$3.75
\$6.00	\$.90	\$26.00	\$3.90
\$7.00	\$1.05	\$27.00	\$4.05
\$8.00	\$1.20	\$28.00	\$4.20
\$9.00	\$1.35	\$29.00	\$4.35
\$10.00	\$1.50	\$30.00	\$4.50
\$11.00	\$1.65	\$31.00	\$4.65
\$12.00	\$1.80	\$32.00	\$4.80
\$13.00	\$1.95	\$33.00	\$4.95
\$14.00	\$2.10	\$34.00	\$5.10
\$15.00	\$2.25	\$35.00	\$5.25
\$16.00	\$2.40	\$36.00	\$5.40
\$17.00	\$2.55	\$37.00	\$5.55
\$18.00	\$2.70	\$38.00	\$5.70
\$19.00	\$2.85	\$39.00	\$5.85
\$20.00	\$3.00	\$40.00	\$6.00

1. Your haircut cost \$20.00. If you tip your stylist 15%, how much money would the tip be?

2. Your restaurant total came to \$38.97. Is \$4.00 enough money to leave as a 15% gratuity?

3. A cup of coffee at the corner bakery costs \$1.00 plus a 15% tip. You purchase 1 cup every weekday morning before your commute to work. At the end of the work week, how much money will you have spent in tips? _____
4. A 15% gratuity is automatically added to a restaurant check when a group has 6 or more people. Your group's bill came to \$106.00. How much will the gratuity be? _____

	Annual Dividend	Yield	High	Low	Close	Volume
Lake Side, Inc.	.50	1.80%	27.50	27.10	27.20	550
Theodore LTD	1.60	10.0%	16.10	15.25	16.00	1250
Retail Discount	2.00	3.73%	55.00	53.50	53.50	6500
Wood Unlimited	0	0.00%	9.50	9.25	9.50	100

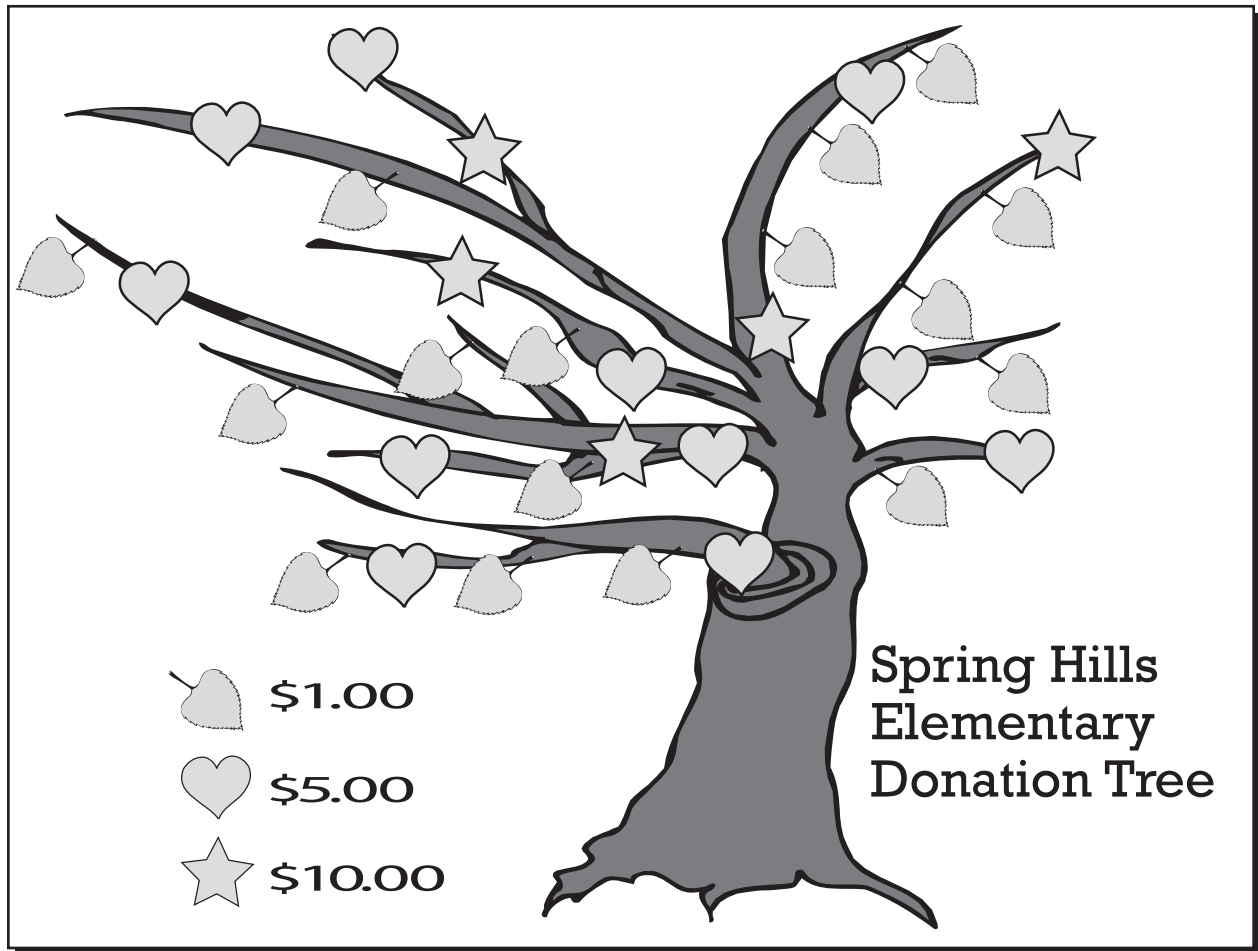
1. If you want Retail Discount to pay you \$2,000 next year, how much money do you need to invest? _____
2. If you bought Theodore LTD at \$12.00 last year and sold at the high today, what is your profit per share? _____
3. You own 3,000 shares of Lake Side, Inc. What amount will you receive in your next quarterly dividend check? _____
4. What would your total investment be if you purchased 100 shares of each stock at the low of the day? _____
5. To maximize your income, would you be better advised to buy 1000 shares of Retail Discount or 2000 shares of Theodore LTD? _____

<h2>Marco's Deli</h2> <p>fresh, fast, delicious</p>	
Sliced Meats (by the pound)	Sides & Snacks
Turkey\$6.99	Pasta Salad\$3.49/lb
Salami\$4.99	Cole Slaw\$1.79/lb
Ham SALE! \$4.00	Potato Salad.....\$1.99/lb
Roast Beef\$5.99	Pickles\$.75/each
	Crackers\$2.25/box
	Bagels.....\$2.99/package
	Bread.....\$1.19/loaf
	Chips.....\$1.79/bag
	Cookies.....\$.50/each
Cheeses (by the pound)	
Cheddar\$5.00	
Baby Swiss.....\$7.49	
American..... SALE! \$3.99	
	Deli Platter or Party Sandwich \$27.95 (serves 8)

- You are having a party this weekend for 12 friends. One deli platter serves 8 people. How much money will you need in order to buy enough food for your guests? _____
- Ham is on sale this week for \$4.00 a pound. How much would $\frac{3}{4}$ of a pound cost?

- A loaf of bread costs \$1.19, 1 pound of roast beef \$5.99, $\frac{1}{2}$ pound of cheddar cheese \$2.50, 1 pound of potato salad \$1.99, and 4 pickles \$3.00. Is \$25.00 enough for this purchase?

- You want to buy a box of crackers, $\frac{1}{2}$ pound of salami, and $\frac{1}{2}$ pound American cheese. How much money will you need? _____
- Pasta salad costs \$3.49 per pound. Cole slaw costs \$1.79 per pound. What is the difference in price between these 2 deli items? _____




1. Spring Hills Elementary is raising money to update the school's computer lab. Currently there are 16 leaves, 11 hearts, and 5 stars. How much money has been raised so far? _____
2. Mrs. Kennedy's class has 23 children. If each child raises \$5.00, how much money will that class give? _____
3. Maria has enough money to purchase 3 leaves, 2 hearts, and 1 star. How much money did she donate? _____
4. The fundraising campaign received an anonymous \$100 donation. How many stars need to be added to the tree? _____
5. Mandy and Holly have raised enough money to purchase 9 leaves and 5 hearts. How much money did they raise? _____



Adults.....	\$7.50
Children	\$5.00
Children (under 5)	FREE!
Senior Citizen Discount 10% off (over 60 years of age)	

1. If you take 3 friends to dinner and 2 people are eligible for the senior discount, what will your total be? _____
2. How much will it cost for 4 friends to go to dinner if everyone is over 60 and a 15% tip is paid? _____
3. Your family takes you to dinner for St. Patrick's Day. The ages of the others in the group are 52, 40, 39, and 36. Without a tip, what would the bill be? _____
4. You decided to treat all of your grandchildren to lunch. Their ages are 14, 12, 10, 9, and the twins are 4. How much will you spend on their meals? _____
5. You and your best friend eat brunch every Sunday at Mama Bing's. You always leave a 15% tip, and you each pay for your own meal. How much money do you spend at the buffet each year? _____



1. Your appointment is scheduled to take approximately 30 minutes. How much money should you add to the parking meter? _____
2. You put 1 nickel and 2 dimes into the meter. How much money did you spend? _____
3. Is it cheaper to add 2 dimes or 1 quarter in order to park for 40 minutes? _____
4. You need to run 2 errands downtown. Last time it took you over an hour and a half. How much money should you put in the parking meter? _____
5. You have 1 quarter, 1 dime, and 1 nickel. How long can you park at this meter before being in violation? _____



Spiffy Car

car wash

Change machines accept
\$1, \$5, and \$10 bills.

All change given in quarters.

\$1.00 — 4 minutes

\$.75 — 3 minutes

\$.50 — 2 minutes

\$.25 — 1 minute

1. If it took you 12 minutes to wash your car, how much money did you spend? _____
2. You have a \$5.00 bill and need change. How many quarters will you get? _____
3. You have 10 quarters. How many minutes can you wash your sports car? _____
4. How long can you wash your truck if you spend \$4.75? _____
5. You went to the car wash with \$10.00. It took you 6 minutes to clean your vehicle. How much money do you have left? _____

Trowbridge Golf Course



Weekend Rates		Daily Rates	
18 holes	\$22.00	18 holes	\$20.00
9 holes	\$11.50	9 holes	\$10.00

Peak Season (May-October) — add \$5.00

After 4 p.m. — half off golf rates

Motorized cart — \$9.00 per 9 holes (each player)

Pull cart — \$1.50 per 9 holes

Yearly pass — \$300

Driving Range — Bucket of balls \$5.00

1. You want to play 9 holes of golf this Saturday. You go to the driving range and hit a bucket of balls before you tee off. Since it is the off season, you decide to walk the course because it is less crowded. How much money did your outing cost? _____


2. Four golfers tee off at 7:00 a.m. and play 18 holes on the first Tuesday in September. All golfers decide to ride in a cart. How much money did this group of 4 spend to golf today?

3. Two friends play 9 holes of twilight golf every Friday night during the month of May. Each player always rents a pull cart rather than carrying their clubs. If the players meet 4 times this month and play 36 holes total, how much will they spend? _____

4. If you normally play 18 holes 20 times per year, is it cheaper to purchase a yearly pass? _____

5. How much does it cost to play 9 holes after 4:00 p.m. on Monday during the month of April?

Urgent Taxi Service



Base rate — \$2.10
\$1.00 per passenger
\$.35 per mile

1. You are downtown and need to take a taxi home. You live 15 miles away. How much will you spend? _____
2. You and a friend take a taxi to a local restaurant. You traveled 3 miles. If you pay with a \$10.00 bill, will you have enough money for a 15% tip? _____
3. Can 4 adults ride in this taxi for under \$20.00 if they only travel 5 miles? _____
4. You rode in the taxicab for 25 miles. How much was your fare? _____
5. Your sister and brother took the taxi to a movie theater. They traveled 12 miles. How much money did the cab driver charge? _____

1. A roll of stamps costs \$37.00. You purchased 2 rolls. How much money did you spend?

2. You bought a stand mixer for \$75.00 after a 50% discount was applied. What was the cost of the mixer before the sale? _____
3. A magazine subscription costs \$12.00 per year. You want to pay in 3 installments. What will each bill cost? _____
4. You went shopping and purchased 3 pairs of jeans for \$90.00 and 1 shirt for \$15.00. How much money did you spend? _____
5. The grocery store is advertising peaches for .58¢ a pound. You have \$5.00. Do you have enough money to purchase 10 pounds? _____
6. Each entree at dinner costs \$9.00. You are buying for 4 people. What will your bill be?

7. A birthday present for your niece costs \$15.00. Gift wrap and a card cost \$5.28. What is the total amount that you spent on your niece? _____
8. Would \$5.00 be enough money to buy 3 annual plants at \$1.29 each? _____
9. You have given \$50.00, \$30.00, and \$175.00 to a local charity this past year. What was your total contribution? _____
10. Your groceries cost \$37.50. You give the cashier \$40.00. How much change will you get back?

1. Tickets to an evening movie cost \$7.50. Matinee shows only cost \$5.00. How much money would you save by going to the earlier show? _____
2. You need to rent an extension ladder this weekend to help with home repairs. The weekend rate is \$25.00, and a security deposit of \$15.00 is required. How much will you spend to rent this ladder? _____
3. Strawberries are \$1.50 a pint. You need 4 pints. How much will you spend? _____
4. Gas costs \$2.19 a gallon. Your car needs 15 gallons. How much money will you spend?

5. Grain is worth \$2.25 a bushel. You have 400 bushels. How much money is your grain worth?

6. You pay \$125.00 a month for electricity. How much will you pay in a year? _____
7. You want to buy a new DVD. The regular price is \$21.50. The store is offering 50% off to all customers who purchase items on Saturday. How much money will you save by purchasing the DVD on Saturday? _____
8. Four theater tickets total \$120.00. What does each ticket cost? _____
9. Eggs cost \$2.60 a dozen. You need 3 dozen. How much will the eggs cost? _____
10. You had \$5.00 and spent \$2.85. What is your change? _____

1. You are buying 2 books at \$9.95 each. How much money do you need? _____
2. A new suit costs \$150.00. Today the suit is 20% off. What will the discounted price be?

3. You went to the grocery store with \$95.00. You left with \$18.00. How much money did you spend? _____
4. The local bakery is offering a special this week on cinnamon rolls. If you purchase half a dozen, you receive 2 free rolls. If cinnamon rolls normally cost \$1.50 each, how much money will you save by taking advantage of this special? _____
5. You make \$10.25 an hour. You worked 8 hours today. How much money did you earn before taxes? _____
6. A gallon of milk costs \$2.89. Will \$5.00 be enough to purchase 3 gallons? _____
7. A college student buys 4 textbooks that cost \$130.00 total. What is the average cost of each book? _____
8. Is it cheaper to buy individual doughnuts for 50¢ apiece or in a baker's dozen for \$6.99?

9. It costs \$2.05 to produce a bushel of grain. You can sell a bushel of grain for \$2.60. How much is your profit per bushel? _____
10. In a restaurant, you order a steak for \$13.50 and soup for \$2.75. What will your total be?

1. You have \$8.50 and want to buy a sandwich, chips, and a drink. The sandwich costs \$5.95, chips \$1.35, and the drink is \$1.05. Do you have enough money to purchase this meal?

2. Your mortgage is \$550 a month. What will your payments total this year? _____
3. Your car needs 2 new tires. If 4 tires cost \$800.00, how much money will you spend on 2?

4. You had \$20.00 and spent \$7.93. How much money do you have left? _____
5. An eye exam and new glasses total \$210.00. If you pay in 3 installments, what will each payment cost? _____
6. Your haircut costs \$20.00. You want to tip your stylist 15%. How much will you give him for a tip? _____
7. Your monthly bills total \$1,200.00. Will \$4,000.00 cover 4 months of expenses? _____
8. A new car is listed at \$25,000. The factory is offering a \$5,000 rebate. What will the price of the vehicle be after the rebate is applied? _____
9. You have 2 pieces of furniture on layaway. Your initial balance was \$682.00. You have made 2 payments totaling \$250.00. What is your remaining balance? _____
10. It costs \$5.00 to rent 4 videos. How much did each rental cost? _____

1. You have 5 plants that produced 30 pounds total of tomatoes this summer. You sold your harvest at the local farmers market for \$1.25 a pound. How much money did you earn?

2. Your car payment is \$300.00 a month. How much money will you spend this year on payments? _____
3. A pair of shoes costs \$54.85. You have \$40.00. How much more money do you need in order to purchase these shoes? _____
4. A large cup of coffee costs \$2.16 and a small cup costs \$1.25. How much more expensive is the larger cup? _____
5. 125 trucks passed through a bridge toll on Saturday morning. Each paid 75¢. How much money was collected in tolls? _____
6. You have 3 accounts totaling \$400.00. One account is worth \$126.50 and another account is valued at \$78.50. How much money is the third account worth? _____
7. You own 1,000 shares of a common stock. The board of directors voted to authorize a 3-for-1 split. How many shares will you have after the split? _____
8. Three pairs of shoes cost \$58.99. How much change will you get back if you pay with a \$100.00 bill? _____
9. How much will a \$1.00 birthday card cost with 7% tax? _____
10. Your dog needs 3 shots at the veterinarian's office. Each shot costs \$9.70. Will \$30.00 be enough to pay for the shots? _____

CHECKING

WRITING AMOUNTS

Write the amounts as you would on a check. An example is done for you.

1. \$2.06 two dollars and 06/100
2. \$4.59 _____
3. \$9.36 _____
4. \$12.20 _____
5. \$17.72 _____
6. \$26.00 _____
7. \$33.61 _____
8. \$39.07 _____
9. \$41.56 _____
10. \$52.14 _____
11. \$55.75 _____
12. \$64.46 _____
13. \$68.32 _____
14. \$74.00 _____
15. \$78.50 _____
16. \$82.42 _____
17. \$84.14 _____
18. \$90.31 _____
19. \$95.79 _____
20. \$97.83 _____

CHECKING

WRITING AMOUNTS

Write the amounts as
you would on a check.

1. \$103.71 _____
2. \$107.23 _____
3. \$198.47 _____
4. \$225.08 _____
5. \$251.86 _____
6. \$320.59 _____
7. \$374.25 _____
8. \$447.15 _____
9. \$482.00 _____
10. \$539.12 _____
11. \$573.99 _____
12. \$603.58 _____
13. \$621.30 _____
14. \$768.27 _____
15. \$796.63 _____
16. \$837.74 _____
17. \$875.18 _____
18. \$903.63 _____
19. \$952.42 _____
20. \$1,000.00 _____

CHECKING

WRITING CHECKS

Copy the sample checks to complete
the directions on pgs. 136-139.

<div>PAY TO THE ORDER OF</div>		<div>DATE</div>
<div>\$</div>		<div>DOLLARS</div>
<div>FOR</div>		<div></div>
<div>111053752 000151100 000</div>		

<div>PAY TO THE ORDER OF</div>		<div>DATE</div>
<div>\$</div>		<div>DOLLARS</div>
<div>FOR</div>		<div></div>
<div>111053752 000151100 000</div>		

<div>PAY TO THE ORDER OF</div>		<div>DATE</div>
<div>\$</div>		<div>DOLLARS</div>
<div>FOR</div>		<div></div>
<div>111053752 000151100 000</div>		

<div>PAY TO THE ORDER OF</div>		<div>DATE</div>
<div>\$</div>		<div>DOLLARS</div>
<div>FOR</div>		<div></div>
<div>111053752 000151100 000</div>		

1. June 10	Arts and Crafts Show\$37.95
2. September 1	Tee-Shirts and More\$10.62
3. April 29	Pet Supply Store\$28.80
4. April 20	Charge Card\$171.22
5. July 5	Water Company\$40.47
6. October 4	Magazine Subscription\$15.75
7. May 13	Music to Your Ears\$18.36
8. February 11	Department Store\$56.10
9. November 9	Charity Organization\$50.00
10. December 11	Gas Station\$12.02
11. March 17	Cable Company\$35.98
12. January 13	Video Store\$15.63
13. August 1	Golf Store\$75.39
14. April 6	Grocery Store\$102.45
15. June 28	Telephone Company\$42.59

- | | |
|------------------|---------------------------------|
| 1. August 28 | Pizza Parlor\$17.89 |
| 2. September 9 | Plumber\$48.43 |
| 3. May 14 | Furniture\$550.50 |
| 4. October 31 | Party Supply Store\$13.84 |
| 5. June 29 | Shoe Store\$39.64 |
| 6. March 29 | Grocery Store\$74.85 |
| 7. December 18 | Garbage Removal\$25.00 |
| 8. April 27 | Toy Store\$12.98 |
| 9. August 12 | Appliance Repair\$96.07 |
| 10. July 21 | Picture Studio\$31.16 |
| 11. September 30 | Discount Store\$22.75 |
| 12. December 20 | Dentist\$55.00 |
| 13. January 24 | Tile Company\$291.37 |
| 14. February 14 | Clothing Store\$67.91 |
| 15. July 27 | Pharmacy\$83.26 |

CHECKING

WRITING CHECKS

Write the information
on sample checks.

- | | |
|------------------|--|
| 1. April 20 | Dr. Hill\$50.00 |
| 2. December 13 | Electric Company\$173.95 |
| 3. January 24 | Quick and Go Grocery\$86.42 |
| 4. September 9 | Birthday Supply Company\$19.82 |
| 5. May 12 | Cellular Phone\$60.37 |
| 6. August 31 | Phil's Pharmacy\$142.08 |
| 7. February 16 | Gas Station\$88.51 |
| 8. June 5 | Clothing Outlet\$47.60 |
| 9. October 22 | Video Store\$10.28 |
| 10. March 13 | Water Company\$44.39 |
| 11. July 9 | Photo Processing and More\$63.15 |
| 12. November 28 | Credit Card\$256.81 |
| 13. April 17 | Tire Warehouse\$473.27 |
| 14. January 4 | Snow Removal Service\$25.00 |
| 15. September 26 | Book Store\$38.12 |

1. May 22	Beauty Supply Store\$43.58
2. November 30	Hardware Store\$199.37
3. January 11	Computer Warehouse\$51.05
4. August 18	Insurance Company\$452.00
5. April 3	Grocery Store\$91.89
6. October 26	Park District\$25.00
7. February 12	Telephone Company\$83.41
8. March 29	Sanitary District\$22.32
9. June 27	Amy Johnston (Babysitter)\$15.00
10. December 8	Flower Shoppe\$48.65
11. May 11	Farm Bureau\$30.00
12. January 31	News Weekly\$81.48
13. April 23	Gas Station\$18.26
14. July 5	ABC Electric\$74.81
15. September 19	Hair Salon\$35.07

Copy the sample deposit slips to complete the directions on pgs. 141-144.

[illegible]

CHECKING

WRITING DEPOSIT SLIPS

Write the information
on sample deposit slips.

1. September 5 \$13.50.....Check #5147
2. March 21 \$73.08.....Check #1246
 \$25.00.....Cash
3. January 30 \$100.00.....Cash
4. April 11 \$28.62.....Check #2051
5. February 8 \$1,990.87.....Check #0952
6. December 26 \$250.00.....Check #2540
 \$100.00.....Cash
7. July 13 \$46.10.....Check #4218
8. November 24 \$33.28.....Check #3208
9. May 10 \$197.04.....Check #1842
10. June 30 \$70.87.....Check #2177
 \$50.00.....Cash
11. October 18 \$110.29.....Check #0120
12. August 9 \$2,541.82.....Check #2158
 \$100.00.....Cash
13. January 31 \$66.28.....Check #3851
14. March 23 \$381.96.....Check#1247
15. July 12 \$125.87.....Check #2140
 \$250.00.....Cash

CHECKING

WRITING DEPOSIT SLIPS

Write the information
on sample deposit slips.

1. January 16 \$651.91Check #1782
2. April 22 \$47.81Cash
3. September 23 \$193.87Check #2734
 \$120.00Cash
4. December 1 \$2,165.30Check #45442
5. March 30 \$83.63Check #3287
 \$100.00Cash
6. June 18 \$17.59Check #4852
7. May 10 \$57.90Check #1456
 \$89.48Check #1457
8. November 15 \$1,234.82Check #2487
9. February 28 \$118.60Check #2541
10. August 6 \$2,964.28Check #1387
 \$50.00Cash
11. October 17 \$1,832.51Check #2476
12. July 22 \$200.00Cash
13. December 12 \$499.01Check #4028
14. June 30 \$420.32Check #5742
 \$25.00Cash
15. April 9 \$504.72Check #0362

CHECKING

WRITING DEPOSIT SLIPS

Write the information
on sample deposit slips.

- | | | |
|-----------------|------------------|--------------------|
| 1. February 14 | \$32.50..... | Check #5899 |
| 2. November 27 | \$76.69..... | Check #0125 |
| | \$25.00 | Less Cash Received |
| 3. June 19 | \$53.21 | Check #8254 |
| | \$823.18..... | Check #4563 |
| 4. September 21 | \$142.02..... | Check #2147 |
| | \$150.25..... | Cash |
| 5. January 1 | \$28.85 | Check #7515 |
| | \$652.32..... | Check #1452 |
| | \$100.00 | Less Cash Received |
| 6. April 22 | \$852.08..... | Check #2459 |
| | \$210.21..... | Check #5487 |
| 7. March 16 | \$13.50..... | Cash |
| 8. July 8 | \$118.77 | Check #5444 |
| | \$132.58..... | Check #1000 |
| | \$50.00 | Less Cash Received |
| 9. October 31 | \$59.04..... | Check #8458 |
| | \$34.55..... | Cash |
| 10. February 13 | \$2,184.21 | Check #48414 |
| 11. November 10 | \$19.89..... | Check #0236 |
| | \$78.68..... | Check #5487 |
| | \$15.00 | Less Cash Received |
| 12. May 27 | \$71.04 | Check #520 |
| 13. June 15 | \$33.00..... | Check #7584 |
| | \$43.57 | Cash |
| 14. December 31 | \$5,411.02..... | Check #4687 |
| | \$250.00 | Less Cash Received |
| 15. March 2 | \$197.41..... | Check #5274 |

CHECKING

WRITING DEPOSIT SLIPS

Write the information
on sample deposit slips.

1. February 18 \$154.28.....Check #6067
2. October 30 \$18.32Check #54785
 \$75.00.....Cash
3. December 4 \$41.25.....Check #0214
4. May 23 \$18.37Check #228
 \$20.00.....Cash
5. January 16 \$96.45.....Check #6851
6. April 12 \$711.02.....Check #1141
7. July 5 \$19.95.....Check #1218
8. November 29 \$351.99.....Check #2956
 \$50.00Less Cash Received
9. March 11 \$42.64.....Check #1732
 \$85.00.....Cash
10. June 30 \$105.74.....Check #0210
11. October 8 \$24.04Check #26
12. August 17 \$61.72.....Check #2522
 \$20.00Less Cash Received
13. September 14 \$4,750.00.....Check #1463
14. February 3 \$28.78.....Check #5664
15. April 25 \$485.33.....Check #2148
 \$250.00Check
 \$100.00Less Cash Received

CHECKING

ORGANIZING INFORMATION

Place the information
in the appropriate column.

Deposit.....\$15.00
 Payment.....\$45.00
 Withdrawal\$20.00
 Automatic Payment.....\$100.00
 Fee.....\$2.00
 Credit.....\$35.00
 Deposit.....\$80.00
 Debit Card.....\$65.00
 Payment.....\$10.00
 Credit.....\$25.00

Payment/Debit	Deposit/Credit

Payment.....\$50.25
 ATM Withdrawal\$10.75
 Credit.....\$60.00
 Withdrawal.....\$125.50
 Automatic Deposit.....\$30.75
 Deposit\$45.25
 Debit Card.....\$15.00
 Fee.....\$5.50
 Payment.....\$65.25
 Debit.....\$75.75

Payment/Debit	Deposit/Credit

CHECKING

ORGANIZING INFORMATION

Place the information
in the appropriate column.

Withdrawal\$48.39
 Deposit\$521.35
 Payment.....\$24.78
 Debit.....\$76.01
 Fee\$2.00
 ATM Withdrawal\$75.00
 Deposit.....\$1,521.83
 Debit\$102.28
 Credit.....\$95.27
 Payment.....\$30.47

Payment/Debit	Deposit/Credit

CHECKING

ORGANIZING INFORMATION

Place the information
in the appropriate column.

Deposit.....\$1,548.25
 Payment.....\$61.47
 ATM Withdrawal.....\$100.00
 Fee.....\$5.00
 Credit.....\$41.36
 Debit Card.....\$7.51
 Payment.....\$39.01
 Direct Deposit.....\$87.88
 Fee.....\$2.00
 Withdrawal.....\$75.00

Payment/Debit	Deposit/Credit

CHECKING

ORGANIZING INFORMATION

Place the information
in the appropriate column.

Deposit.....\$50.00
 Deposit.....\$1,285.21
 Withdrawal\$69.50
 Payment.....\$31.88
 Fee.....\$5.00
 Credit\$47.39
 Payment.....\$148.02
 ATM Withdrawal\$20.00
 Deposit.....\$74.17
 Debit.....\$381.96

Payment/Debit	Deposit/Credit

CHECKING

ORGANIZING INFORMATION

Place the information
in the appropriate column.

Payment\$567.82
 ATM Deposit.....\$40.00
 Deposit.....\$24.46
 Debit\$86.15
 Fee.....\$2.00
 Payment.....\$74.57
 Credit.....\$125.87
 Withdrawal\$30.00
 Deposit\$500.00
 Payment.....\$62.99

Payment/Debit	Deposit/Credit

CHECKING

ORGANIZING INFORMATION

Place the information
in the appropriate column.

Deposit.....\$1,457.94
 Debit.....\$82.37
 Payment.....\$40.58
 Payment.....\$387.05
 Credit.....\$15.00
 ATM Withdrawal.....\$100.00
 Debit.....\$154.27
 Withdrawal.....\$83.31
 Deposit.....\$66.50
 Fee.....\$20.00

Payment/Debit	Deposit/Credit

CHECKING

ENTERING INFORMATION

Enter the information in the checkbook register in chronological order.

10/14	Water Company	Check #1
10/18	Gift Shop	Check #2
10/23	Plumber	Check #3
10/26	Babysitter	Check #4
10/31	Costume Rental	Check #5
10/17	Deposit	
10/25	ATM Withdrawal	
10/28	Deposit	

Check #	Date	Transaction

CHECKING

ENTERING INFORMATION

Enter the information in the checkbook register in chronological order.

8/1	Deposit	
8/12	Credit	
8/17	ATM Withdrawal	
8/28	Fee	
8/5	Public Library	Check #1
8/8	Mechanic	Check #2
8/16	Clothing Store	Check #3
8/29	Catering	Check #4

Check #	Date	Transaction

CHECKING

ENTERING INFORMATION

Enter the information in the checkbook register in chronological order.

1/31	Grocery Store	Check #5
1/15	Deposit	
1/23	Shoe Repair	Check #4
1/16	Hardware Store	Check #1
1/7	ATM Withdrawal	
1/22	Gas Station	Check #3
1/20	Flower Shop	Check #2
1/24	Deposit	

Check #	Date	Transaction

CHECKING

ENTERING INFORMATION

Enter the information in the checkbook register in chronological order.

5/7	Appliance Repair	Check #38
5/2	Mortgage Payment	Check #36
5/15	ATM Withdrawal	
5/4	Deposit	
5/8	Deposit	
5/12	Postmaster	Check #39
5/5	Debit Card	
5/4	Restaurant	Check #37

Check #	Date	Transaction

CHECKING

ENTERING INFORMATION

Enter the information in the checkbook register in chronological order.

9/25	Lawn Care	Check #128
9/24	ATM Deposit	
9/30	Discount Store	Check #131
9/14	Lumberyard	Check #126
9/26	Grocery Store	Check #129
9/22	Loan Payment	Check #127
9/9	Music Shoppe	Check #125
9/27	Park District	Check #130

Check #	Date	Transaction

CHECKING

ENTERING INFORMATION

Enter the information in the checkbook register in chronological order.

4/20	Chiropractor	Check #310
3/16	Automatic Payment	
4/6	Film Processing	Check #308
3/22	Cleaning Service	Check #306
4/12	Deposit	
4/20	Pharmacy	Check #311
3/31	Pizza Parlor	Check #307
4/18	Hair Studio	Check #309

Check #	Date	Transaction

CHECKING

ENTERING INFORMATION

Enter the information in the checkbook register in chronological order.

7/10	Fitness Class	Check #524
6/27	Deposit	
7/19	Cash	Check #525
7/1	Cable Repair	Check #523
7/15	ATM Withdrawal	
7/19	Dentist	Check #526
7/12	Deposit	
6/25	Condo Fee	Check #522

Check #	Date	Transaction

CHECKING

BALANCING REGISTERS

Put the information in the appropriate column and balance the register.

Starting Balance.....\$50.00

\$30.00.....Debit Card

\$100.00Deposit

\$50.00.....Payment

\$15.00.....ATM Withdrawal

\$20.00.....Automatic Payment

\$100.00Credit

\$20.00.....Debit

\$15.00.....Credit

[illegible]

CHECKING

BALANCING REGISTERS

Put the information in the appropriate column and balance the register.

Starting Balance.....\$100.00

\$75.50.....Deposit

\$5.00.....ATM Withdrawal

\$20.75.....Payment

\$200.00Automatic Deposit

\$45.25.....Debit Card

\$175.50Credit

\$10.75.....Payment

\$5.00.....Fee

[illegible]

CHECKING

BALANCING REGISTERS

Put the information in the appropriate column and balance the register.

Starting Balance.....\$500.00

\$783.00Deposit

\$57.00.....Payment

\$15.75Automatic Withdrawal

\$46.25.....Payment

\$10.00.....ATM Withdrawal

\$23.50.....Debit Card

\$187.00Payment

\$31.50.....Credit

[illegible]

Starting Balance.....\$387.47

\$26.04.....Debit Card

\$117.12Payment

\$1,220.98.....Automatic Deposit

\$15.00 Fee

\$76.32Deposit

\$192.25Payment

\$43.81Debit

\$550.11Payment

[illegible]

CHECKING

BALANCING REGISTERS

Put the information in the appropriate column and balance the register.

Starting Balance.....\$542.31

\$82.36.....Payment

\$12.32.....Debit Card

\$475.00Deposit

\$52.36.....Automatic Debit

\$15.00Returned Check Fee

\$25.21Credit

\$18.23.....Debit Card

\$109.14Deposit

[illegible]

CHECKING

BALANCING REGISTERS

Put the information in the appropriate column and balance the register.

Starting Balance.....\$925.27

\$58.75.....Deposit

\$142.36Payment

\$2.00.....Fee

\$68.10.....Debit Card

\$500.00Automatic Deposit

\$48.52Withdrawal

\$60.50.....Credit

\$32.93.....Payment

[illegible]

CHECKING

BALANCING REGISTERS

Put the information in the appropriate column and balance the register.

Starting Balance\$1,503.28

\$38.12Withdrawal

\$500.00Deposit

\$82.16.....Payment

\$5.00Credit

\$50.00.....Deposit

\$13.50.....Automatic Payment

\$22.19.....ATM Withdrawal

\$148.34Deposit

[illegible]

Current Balance = \$500.00

6/21	ATM Deposit	\$50.00	
6/28	Pet Store (dog food)	\$23.58	Check #53
6/12	Department Store (shoes)	\$38.19	Check #50
6/15	Deposit	\$310.33	
6/27	Fee	\$7.50	
6/14	CASH	\$75.00	Check #52
6/30	Computer Store (ink cartridges)	\$62.04	Check #54
6/12	Music Store (CD)	\$15.79	Check #51

[illegible]

Current Balance = \$693.21

2/1	Fee (new checks)	\$20.00	
2/15	Deposit	\$1,824.23	
2/28	ACME Electric (Jan. bill)	\$179.38	Check #90
2/13	Quick Fill (gasoline)	\$27.52	Debit Card
2/4	Dance-N-Time (Feb. lessons)	\$36.00	Check #87
2/8	Corner Pharmacy	\$10.00	Debit Card
2/21	American Auto (car payment)	\$348.19	Check #89
2/14	A. Floral (roses)	\$19.95	Check #88

[illegible]

Current Balance = \$739.96

12/24	Bakery	\$28.32	Debit Card
12/2	Smith Electric (light fixtures)	\$210.40	Check #1329
12/9	ATM Withdrawal	\$20.00	
12/18	Chiropractor	\$75.00	Check #1331
12/16	Gasoline Station	\$31.23	Debit Card
12/10	Campbell's Grocery	\$115.46	Check #1330
12/4	Direct Deposit	\$1,000.00	
12/23	Cellular Connection (service plan)	\$62.38	Check #1332

[illegible]

Current Balance = \$1,052.00

11/11	ABC Hauling (garbage/recycling)	\$38.68	Check #280
11/22	Edward's Farm (firewood delivery)	\$192.37	Check #282
11/10	Direct Deposit	\$250.00	
11/5	For Kid's (donation)	\$100.00	Check #278
11/12	The Jewelry Box (necklace repair)	\$16.24	Check #281
11/29	ATM Withdrawal	\$20.00	
11/9	Candles and More	\$13.72	Check #279
11/23	Grocery Store	\$117.85	Debit Card

[illegible]

Current Balance = \$957.16

9/21	Credit	\$8.74	
9/14	Fee	\$5.00	
9/7	Deposit	\$1,572.83	
9/2	City Bank (car payment)	\$310.00	Check #101
9/12	ATM Withdrawal	\$50.00	
9/24	City Bank (mortgage payment)	\$421.32	Check #104
9/20	Carpet Magic (upholstery repair)	\$67.26	Check #103
9/18	Grocery Store	\$93.98	Check #102

[illegible]

Current Balance = \$870.53

3/29	Hardware Store (paint)	\$19.12	Check #1390
3/24	Camp Sunshine (contribution)	\$25.00	Check #1388
3/31	Ray's Locksmith	\$42.43	Check #1392
3/26	Direct Deposit	\$1,531.37	
3/28	Times (newspaper)	\$67.15	Check #1389
3/31	<i>On With The Show</i> (theater tickets)	\$52.75	Check #1391
3/24	Insurance Inc.	\$172.86	Check #1387
3/30	ATM Withdrawal	\$100.00	

[illegible]

Current Balance = \$859.87

4/15	Toy Store (birthday gift)	\$17.62	Check #101
5/13	Automatic Deposit	\$998.03	
4/20	Health Club (monthly fee)	\$55.00	Check #103
5/4	Grocery Store	\$72.51	Check #105
5/1	TV Repair Service	\$45.00	Check #104
4/29	Deposit	\$372.50	
4/20	Country Club (monthly dues)	\$100.00	Check #102
5/20	Dentist (cleaning)	\$65.00	Check #106

[illegible]

ANSWER KEY

Math: Word Problems with Pictures

page 6

1. 90 feet
2. 5 yards
3. 60 inches
4. 54 feet
5. 32 yards

page 7

1. 354 miles
2. No
3. 230 miles
4. Yes
5. 279 miles
6. No
7. Yes

page 8

1. 4 seats
2. No
3. 7 people
4. 4 people
5. No; 6 chairs

page 9

1. 12 children
2. 2 swings
3. 9 children
4. 2 children
5. 20 children

page 10

1. 420 calories
2. 71% calories from fat
3. Yes
4. 8 grams
5. Yes

page 11

1. Yes
2. 1 shelf
3. More than
4. 24 inches
5. 12 inches
6. 6 inches
7. 120 inches
8. Yes

page 12

1. 200 seats
2. 17 seats
3. 4
4. Yes
5. 650 seats

page 13

1. Yes
2. 249,651,000 points
3. 1360.41 points
4. No
5. No

page 14

1. 11 teams
2. No
3. 0
4. 8 teams
5. 6 teams
6. No
7. 3 points
8. Yes

page 15

1. 25 lbs.
2. 30 reps.
3. 92.5 lbs.
4. 20 lbs.
5. 80 lbs.

page 16

1. 34 $\frac{1}{2}$ –35
2. X-Large Tall
3. 4 inches
4. 17–17 $\frac{1}{2}$
5. 1 inch

page 17

1. 1939 miles
2. 6 MPG
3. 128 miles
4. 9.7 CU FT
5. 11.4 inches

page 18

1. No
2. 22 square feet
3. 227.12 square feet
4. 313.6 square feet
5. 84 square feet
6. 12.5

page 19

1. 76.5°
2. 11°
3. 4°
4. 14°
5. 37°
6. 6 cities

page 20

1. 19 lots
2. 10 lots

3. 47%

4. 5 kids
5. 13 lots

page 21

1. 12 tablespoons
2. 9 teaspoons
3. 6 cups
4. No
5. 5 cups
6. 24 tablespoons
7. 32 teaspoons
8. No

page 22

1. 2172 miles
2. 112,625 miles
3. 120,000 miles
4. 23,000 miles
5. No

Math: Word Problems

page 23

1. 15 seats
2. .333
3. Yes
4. 8 patients
5. 20 loads
6. 45 seats
7. 6 times/month
8. 6 batteries
9. 3 hours
10. 8 years

page 24

1. 12 paychecks
2. 4 canoes
3. 2 seats
4. 3 cans
5. 4 $\frac{1}{2}$ boxes
6. Yes
7. 8 weeks
8. 49 e-mails
9. 45%
10. 6 bottles

page 25

1. 4 casseroles
2. 25%, or $\frac{1}{4}$ of a box
3. 64 people
4. 12 messages
5. 24 magazines
6. 20%
7. 38 times

8. 42 hours
9. 123 questions
10. 16 people

page 26

1. 5 flower beds
2. 19 days
3. 12 openings
4. 24 times
5. 14 points
6. 25%
7. 11 cards
8. 36 times
9. 126 diapers
10. 12 eggs

page 27

1. 11 more washing machines
2. 60 days
3. 104 people
4. 3 seats
5. 60 males
6. 54 bulbs
7. 3 times
8. 105 cars
9. 8 cabs
10. 6 pills

Calendar: General Orientation

page 28

1. January
2. February
3. March
4. April
5. May
6. June
7. July
8. August
9. September
10. October
11. November
12. December

1. Sunday
2. Monday
3. Tuesday
4. Wednesday
5. Thursday
6. Friday
7. Saturday

Years will vary.

ANSWER KEY

page 29

Answers will vary.

page 30

1. d.
2. e.
3. g.
4. b.
5. j.
6. i.
7. a.
8. f.
9. h.
10. c.

page 31

1. b
2. d
3. a
4. c
1. 4 seasons
2. Winter
3. Fall
4. Fall
5. Spring
6. Summer
7. Answers will vary.
8. Answers will vary.

Calendar: Sequencing

page 32

These dates should be added to the calendar: 3, 5, 7, 11, 15, 19, 21, 25, 28.

page 33

These dates should be added to the calendar: 2, 6, 10, 16, 18, 21, 22, and 26.

page 34

The word *Sunday* should be added at the top of the first column.

These dates should be added to the calendar: 2, 6, 11, 15, 17, 26, 28, and 30.

page 35

August calendar: The words *Tuesday* and *Friday* should be added at the top of the third and fifth columns. These dates should be added: 3, 5, 8, 13, 14, 17, 18, 22, 23, 25, 27, and 29.

July calendar: The word *July* should be added to the top of the calendar. The letters *M* and *S* should be added at the top of the second and seventh columns. These dates should be added: 3, 5, 6, 11, 14, 15, 18, 19, 20, 24, 27, 29, and 30.

September calendar: The letters *S* and *W* should be added at the top of the first and fourth columns. These dates should be added: 2, 5, 6, 8, 11, 14, 16, 17, 20, 23, 25, 26, and 29.

Calendar: Calendar Questions

page 36

1. February
2. 4 days
3. Sunday
4. 9 days
5. 2nd and 16th
6. Monday
7. Yes
8. Thursday
9. March
10. No

page 37

1. April
2. 5 days
3. Thursday
4. Monday, 25th
5. Monday, 18th
6. May
7. 24th
8. Sunday
9. 3 days

page 38

1. August
2. September
3. Sunday
4. 5th
5. No
6. 8 days
7. Friday
8. No
9. 4 days
10. Monday

page 39

1. November
2. 4 days
3. Monday
4. 13th and 27th
5. 3 days
6. No
7. 18th
8. Monday
9. October
10. December

Calendar: Daily Planners

page 40

- 1 Lap swim at the indoor pool, drop off kids at school, pick up dry cleaning, and meet with Emma.
 2. 1-2 p.m.
 3. 3 p.m.
 4. Picking up
 5. No
- page 41**
1. 5 meetings
 2. 7:00 a.m.
 3. 1:30 p.m.
 4. 12:00 p.m.
 5. Yes
 6. Social hour, Benefit dinner, and Dance

page 42

1. 9 activities
2. Farmer's Market, mail letters, donations to shelter, bagel shop
3. Yes
4. Yes
5. Before
6. around 7:00 a.m.
7. 11:30 a.m.
8. No

page 43

- 5-6: Watch the sunrise
- 6-7: Watch favorite a.m. news show
- 7-8: Eat breakfast
- 12-1 Eat lunch and watch the local news

- 2-3 Pick up kids after school
- 5-6 Watch nightly news
- 6-7 Eat dinner
- 7-8 Watch the sunset
- 9-10 Brush teeth before bed

page 44 Morning

- 7:25 Take car in for routine service
- 9:15 Pick up pictures from photo lab
- 9:30 Pick up prescription
- 10:00 Chiropractor appointment

Afternoon

- 1:15 Lunch with Dan and Carol
- 2:00 Volunteer at nursing home
- 4:30 Walk dog

Evening

- 5:30 Dinner at La Casa
- 7:45 Movie theater
- 9:30 Watch favorite comedy show on TV

pages 45-46

Answers will vary.

Calendar: Weekly Planners

page 47

1. Monday, Tuesday, Wednesday, and Thursday
2. Yes
3. Evening
4. Friday
5. Soccer game and volunteering at food pantry

page 48

1. Tuesday, Thursday, and Friday mornings
2. 2 days
3. No
4. Monday, Wednesday, Friday, and Saturday
5. Evenings
6. Karen, Lisa, Stacy
7. No

ANSWER KEY

page 49

1. Tuesday at 6 p.m.
2. Thursday at 10:30 a.m.
3. Thursday at 3 p.m.
4. No
5. Saturday morning
6. 2 days

page 50

Monday

Morning Work 7:30-11:30
Afternoon 3:00 appointment with broker

Tuesday

Morning Work 7:30-11:30
Evening Guitar lesson at 6:00

Wednesday

Morning Work 7:30-11:30
Evening Cooking class 8:00

Thursday

Morning Work 7:30-11:30
Afternoon Clean house
Evening Guitar lesson at 6:00 and then grocery shop.

Friday

Morning Work 7:30-11:30
Afternoon John home

Saturday

Morning Ship package to Aunt Louise

page 51

AM

Mon. 10:00 pottery class
Tues. 9:00 yoga class
Wed. 10:00 pottery class
Thurs. Balance checkbook
Sat. Volunteer at shelter

Noon

Mon. Mall
Tues. Lunch with Robert
Sat. Volunteer at shelter
Sun. Brunch at 12:00

PM

Fri. 7:30 basketball game

page 52

Mon. 5:30-6:15 exercise, no school
Tues. 5:30-6:15 exercise, Physical therapy at 7:30

Wed. 1-2 fence repair, 2-3 carpet repair

Thurs. Physical therapy at 7:30, 10:00 Adam to the pediatrician

Fri. 5:30-6:15 exercise
Sat. 9:00 SUV to dealership, work 1-3
Sun. Work 1-3

page 53

Answers will vary.

Calendar:

Monthly Planners

page 54

1. 2, 4, 14, 16, 18, 21, 23, 25, 28, and 30
2. 4½
3. 3 birthdays
4. Tuesday the 22nd, 5:30 p.m.
5. 6 hours
6. 7 days

page 55

1. Wed., Dec. 12
2. Thurs., Dec. 20
3. Monday
4. Fri., Dec. 7; Sat., Dec. 15
5. No
6. Wed., Dec. 5
7. No
8. Yes

page 56

1. Wed., March 3; Tues., March 16; and Wed., March 31.
2. Mon., March 22–Fri., March 26
3. Fri., March 12
4. Cereal or crackers
5. Fruit or vegetable
6. 3 times

page 57-59

Activities will appear on the proper dates on the calendar.

page 60

Answers will vary.

Calendar:

Yearly Planners

page 61

1. 2 times a year
2. April and October
3. No
4. May and September
5. February
6. Yes

page 62

1. No
2. 3 months
3. Before
4. August and September
5. 3 months

page 63

1. Wrestling and volleyball
2. No
3. 7
4. Basketball
5. No
6. August, September, and October

page 64

Jan. New Year's Day
Feb. Lincoln's Birthday
March St. Patrick's Day
April
May Mother's Day
Memorial Day
June Father's Day
Flag Day
July Independence Day
Aug.
Sept. Labor Day
Patriot Day
Oct. Halloween
Columbus Day
Nov. Veteran's Day
Thanksgiving
Dec. Hanukkah
Christmas

page 65

March Wash windows
April Repair roof
May Clean gutters, fertilize lawn, and plant vegetable garden
June: Paint house and fertilize lawn
July Fertilize lawn
Aug. Fertilize lawn
Sept. Fertilize lawn and wash windows
Oct. Plant spring bulbs
Nov. Clean gutters and put out holiday decorations

page 66

Jan. Mortgage, sanitation, car payment, gas/electric, and home equity loan
Feb. Mortgage, life insurance premium, car payment, gas/electric, water, and home equity loan
March Mortgage, sanitation, car payment, gas/electric, and home equity loan
April Mortgage, car payment, income tax, gas/electric, and home equity loan
May Mortgage, sanitation, car payment, gas/electric, water, and home equity loan
June Mortgage, car payment, property tax, car insurance premium, gas/electric, and home equity loan
July Mortgage, sanitation, car payment, gas/electric, and home equity loan
Aug. Mortgage, life insurance premium, car payment, gas/electric, water, and home equity loan

ANSWER KEY

- Sept. Mortgage, property tax, sanitation, car payment, gas/electric, and home equity loan
- Oct. Mortgage, car payment, gas/electric, and home equity loan
- Nov. Mortgage, sanitation, car payment, gas/electric, water, and home equity loan
- Dec. Mortgage, car payment, gas/electric, and home equity loan

page 67

Answers will vary.

Time: Telling Time

page 68

- 3:00
- 8:00
- 6:00
- 11:15
- 12:45
- 9:30
- 10:05
- 2:35
- 4:05
- 7:57
- 1:22
- 5:49

page 69

- 12:00
- 4:00
- 10:00
- 5:45
- 1:15
- 6:30
- 2:05
- 11:25
- 7:10
- 3:32
- 8:46
- 9:13

page 70

- 1:00
- 2:00
- 10:00
- 12:30
- 3:15
- 9:45
- 2:35
- 6:55
- 6:20
- 11:24
- 8:57
- 4:08

Time:

Writing Time on Clocks

The clock hands should be in the correct position to match the times.

Time: Word Problems with Pictures

page 74

- 4 hours
- 1 hour and 35 minutes
- 11 movies
- No
- 1 matinee showing
- 3 movies

page 75

- 11 a.m.
- 15 minutes
- No
- 55 minutes
- 30 minutes
- 60 minutes
- 3:55 p.m.

page 76

- 9 hours
- 14½ hours
- 15 minutes
- 1 hour
- 7 hours
- No

page 77

- By 10:00 a.m.
- 10:00 a.m.
- By 12:00 p.m.

- By 3:00 p.m.
- By 5:00 p.m.

page 78

- 4 time zones
- 2:00 p.m.
- 2:52 p.m.
- 2:00 p.m.
- No
- 8:54 a.m.

page 79

- 4 hours
- 1½ hours
- 2½ hours
- 2 hours and 15 minutes
- 10 hours
- No

page 80

- 2 hours
- 4 hours
- Yes
- Noon (12:00 p.m.)
- 60 minutes
- 2 hours

page 81

- 25-30 minutes
- 45-50 minutes
- 31-36 minutes
- 5 minutes
- No

page 82

- 2:11
- 1:03
- 17 seconds
- 2:40
- 4 runners

page 83

- 2 hours and 45 minutes
- 30 minutes
- 9:25-9:30 a.m.
- 5 minutes
- 20 minutes
- 5 minutes
- 30 minutes/week
- 11:00 a.m.

page 84

- 2 hours and 18 minutes
- 1 hour and 15 minutes
- 1 hour and 15 minutes

- 4:48 a.m.
- 1 hour and 38 minutes

page 85

- 15 minutes
- 50 minutes
- No
- 1 hour and 20 minutes
- 2 hours

page 86

- Rail A
- 1 hour
- Rail D
- 25 minutes
- Yes

page 87

- No
- 6:00 a.m.
- 6:30 a.m. from Campbell Island
- 1 hour
- No

page 88

- 5:00 p.m.
- Yes
- 6 hours
- 14 hours
- Yes

page 89

- 45 minutes each; 1½ hours total
- No
- 1½ hours
- Yes
- 4 hours

page 90

- 6:30 a.m.
- 25 minutes
- 10 hours
- Madison County
- 1 hour

page 91

- 9:48 a.m.
- No
- AEK Clothing
- Morning
- 11:09 a.m.
- 31 minutes
- 10:47 p.m.
- 2 e-mails

ANSWER KEY

Time: Word Problems

page 92

- 30 minutes
- 9:30 p.m.
- 7:00 p.m.
- 3 hours/week
- 2 hours and 35 minutes
- 11:30 a.m.
- 6 hours
- 9:30 p.m.
- 30 minutes
- 11:35 a.m.

page 93

- Yes
- 1:00 p.m.
- 5:15 p.m.
- 7:15 a.m.
- 6:00 a.m.
- 10:00 a.m.
- 7½ hours
- 6:47 a.m.
- 14 minutes
- 45 minutes

page 94

- 5:50 p.m.
- 4:00 p.m.
- 3:30 p.m.
- 3 full games
- 11:10 a.m.
- 1 hour and 15 minutes
- 6:00 a.m.
- 1:00 p.m.
- 12 articles
- Your spouse

page 95

- 2½ hours
- 9½ hours
- 1:15 p.m.
- No
- 1½ hours
- 7:25 p.m.
- 37 minutes
- 40 mph
- 1 hour and 25 minutes
- 26 minutes

page 96

- 6:10 a.m.
- 1 hour and 15 minutes
- 8:00 a.m.
- No
- 3 hours
- 1:55 p.m.
- 8 hours a night
- 32 minutes
- More than
- 256 megs

Money: Identifying Coins

page 97

- d
- a
- c
- b

Money: Identifying Bills

page 98

- b
- a
- f
- e
- d
- c

Money: General Questions

page 99

- 5 pennies
- 10 pennies
- 25 pennies
- 50 pennies
- 100 pennies
- 2 nickels
- 5 nickels
- 10 nickels
- 20 nickels
- 5 dimes
- 10 dimes
- 2 quarters
- 4 quarters
- 2 half-dollars
- 5 one-dollar bills
- 10 one-dollar bills

- 20 one-dollar bills
- 50 one-dollar bills
- 100 one-dollar bills
- 2 five-dollar bills
- 4 five-dollar bills
- 10 five-dollar bills
- 20 five-dollar bills
- 5 twenty-dollar bills
- 2 fifty-dollar bills

page 100

- | | |
|---------|---------|
| 1. Yes | 13. Yes |
| 2. No | 14. No |
| 3. No | 15. Yes |
| 4. Yes | 16. No |
| 5. No | 17. Yes |
| 6. Yes | 18. Yes |
| 7. Yes | 19. No |
| 8. Yes | 20. Yes |
| 9. No | 21. Yes |
| 10. No | 22. Yes |
| 11. Yes | 23. No |
| 12. Yes | 24. Yes |
| | 25. No |

Money: Determining Coin Values

page 101

- | | |
|------|------|
| 1. c | 2. b |
| 3. a | 4. c |
| 5. b | 6. b |

page 102

- | | |
|------|------|
| 1. c | 2. a |
| 3. b | 4. a |
| 5. b | 6. c |

page 103

- | | |
|------|------|
| 1. a | 2. b |
| 3. c | 4. b |
| 5. a | 6. b |

Money: Determining Coin and Bill Values

page 104

- | | |
|------|------|
| 1. c | 2. b |
| 3. a | 4. b |
| 5. a | 6. c |

page 105

- | | |
|------|------|
| 1. b | 2. b |
| 3. a | 4. c |
| 5. a | 6. b |

Money: Calculating Coin Values

page 106

- | | |
|--------|-----------|
| 1. 17¢ | 2. 40¢ |
| 3. 56¢ | 4. 60¢ |
| 5. 35¢ | 6. \$1.11 |

page 107

- | | |
|--------|--------|
| 1. 25¢ | 2. 60¢ |
| 3. 52¢ | 4. 35¢ |
| 5. 96¢ | 6. 32¢ |

Money: Calculating Coin and Bill Values

page 108

- | | |
|------------|------------|
| 1. \$2.09 | 2. \$6.30 |
| 3. \$16.36 | 4. \$14.45 |
| 5. \$22.58 | 6. \$37.18 |

page 109

- | | |
|------------|-------------|
| 1. \$7.26 | 2. \$21.20 |
| 3. \$33.45 | 4. \$21.47 |
| 5. \$96.13 | 6. \$159.17 |

page 110

- | | |
|-------------|-------------|
| 1. \$45.30 | 2. \$85.60 |
| 3. \$52.15 | 4. \$111.65 |
| 5. \$175.70 | 6. \$620.36 |

Money: Word Problems with Pictures

page 111

- Yes
- \$10.93
- 1 pre-made pizza crust
- sausage
- No

page 112

- \$480.00
- 3 women's games
- \$100.00
- \$368.00
- \$23.00

ANSWER KEY

page 113

1. Yes
2. No
3. \$19.75
4. \$12.50
5. \$14.25

page 114

1. \$4.00
2. \$6.50
3. \$12.00
4. 3 days
5. Yes

page 115

1. \$6.00
2. \$40.00
3. \$26.00
4. \$72.38
5. \$6.00

page 116

1. \$42.20
2. \$45.15
3. \$31.42; \$33.62
4. \$5.79
5. \$3.00

page 117

1. \$55.90
2. \$10.00
3. \$60.00
4. \$42.90
5. \$47.90

page 118

1. 9.6 gallons
2. Regular
3. Yes
4. 20¢
5. \$41.12

page 119

1. \$3.00
2. No
3. 75¢
4. \$15.90

page 120

1. \$53,500.00
2. \$4.10 per share
3. \$375.00
4. \$10,510.00
5. 2000 shares of Theodore LTD

page 121

1. \$55.90
2. \$3.00
3. Yes
4. \$6.75
5. \$1.70/lb.

page 122

1. \$121.00
2. \$115.00
3. \$23.00
4. 10 stars
5. \$34.00

page 123

1. Answers will vary depending on your age.
2. \$31.05
3. Answers will vary depending on your age.
4. \$20.00
5. Answers will vary depending on your age.

page 124

1. 15¢
2. 25¢
3. 2 dimes
4. 40¢
5. 1 hour and 36 minutes

page 125

1. \$3.00
2. 20 quarters
3. 10 minutes
4. 19 minutes
5. \$8.50

page 126

1. \$16.50
2. \$172.00
3. \$72.00
4. Yes
5. \$5.00

page 127

1. \$8.35
2. Yes
3. Yes
4. \$11.85
5. \$8.30

Money: Word Problems**page 128**

1. \$74.00
2. \$150.00
3. \$4.00
4. \$105.00
5. No
6. \$36.00
7. \$20.28
8. Yes
9. \$255.00
10. \$2.50

page 129

1. \$2.50
2. \$40.00
3. \$6.00
4. \$32.85
5. \$900.00
6. \$1,500.00
7. \$10.75
8. \$30.00
9. \$7.80
10. \$2.15

page 130

1. \$19.90
2. \$120.00
3. \$77.00
4. \$3.00
5. \$82.00
6. No
7. \$32.50
8. Individual doughnuts
9. 55¢ per bushel
10. \$16.25

page 131

1. Yes
2. \$6,600.00
3. \$400.00
4. \$12.07
5. \$70.00
6. \$3.00
7. No
8. \$20,000.00
9. \$432.00
10. \$1.25

page 132

1. \$37.50
2. \$3,600.00
3. \$14.85
4. 91¢

5. \$93.75
6. \$195.00
7. 3,000
8. \$41.01
9. \$1.07
10. Yes

Checking: Writing Amounts**page 133**

1. two dollars and 06/100
2. four dollars and 59/100
3. nine dollars and 36/100
4. twelve dollars and 20/100
5. seventeen dollars and 72/100
6. twenty-six dollars and no/100
7. thirty-three dollars and 61/100
8. thirty-nine dollars and 07/100
9. forty-one dollars and 56/100
10. fifty-two dollars and 14/100
11. fifty-five dollars and 75/100
12. sixty-four dollars and 46/100
13. sixty-eight dollars and 32/100
14. seventy-four dollars and no/100
15. seventy-eight dollars and 50/100
16. eighty-two dollars and 42/100
17. eighty-four dollars and 14/100
18. ninety dollars and 31/100
19. ninety-five dollars and 79/100
20. ninety-seven dollars and 83/100

ANSWER KEY

page 134

1. one-hundred three dollars and 71/100
2. one-hundred seven dollars and 23/100
3. one-hundred ninety-eight dollars and 47/100
4. two-hundred twenty-five dollars and 08/100
5. two-hundred fifty-one dollars and 86/100
6. three-hundred twenty dollars and 59/100
7. three-hundred seventy-four dollars and 25/100
8. four-hundred forty-seven dollars and 15/100
9. four-hundred eighty-two dollars and no/100
10. five-hundred thirty-nine dollars and 12/100
11. five-hundred seventy-three dollars and 99/100
12. six-hundred three dollars and 58/100
13. six-hundred twenty-one dollars and 30/100
14. seven-hundred sixty-eight dollars and 27/100
15. seven-hundred ninety-six dollars and 63/100
16. eight-hundred thirty-seven dollars and 74/100
17. eight-hundred seventy-five dollars and 18/100
18. nine-hundred three dollars and 63/100
19. nine-hundred fifty-two dollars and 42/100
20. one-thousand dollars and no/100

Checking: Organizing Information

page 145

Payment/Debit	Deposit/Credit
\$45.00	\$15.00
\$20.00	\$35.00
\$100.00	\$80.00
\$2.00	\$25.00
\$65.00	
\$10.00	

page 146

Payment/Debit	Deposit/Credit
\$50.25	\$60.00
\$10.75	\$30.75
\$125.50	\$45.25
\$15.00	
\$5.50	
\$65.25	
\$75.75	

page 147

Payment/Debit	Deposit/Credit
\$48.39	\$521.35
\$24.78	\$1,521.83
\$76.01	\$95.27
\$2.00	
\$75.00	
\$102.28	
\$30.47	

page 148

Payment/Debit	Deposit/Credit
\$61.47	\$1,548.25
\$100.00	\$41.36
\$5.00	\$87.88
\$7.51	
\$39.01	
\$2.00	
\$75.00	

page 149

Payment/Debit	Deposit/Credit
\$69.50	\$50.00
\$31.88	\$1,285.21
\$5.00	\$47.39
\$148.02	\$74.17
\$20.00	
\$381.96	

page 150

Payment/Debit	Deposit/Credit
\$567.82	\$40.00
\$86.15	\$24.46
\$2.00	\$125.87
\$74.57	\$500.00
\$30.00	
\$62.99	

page 151

Payment/Debit	Deposit/Credit
\$82.37	\$1,457.94
\$40.58	\$15.00
\$387.05	\$66.50
\$100.00	
\$154.27	
\$83.31	
\$20.00	

Checking: Entering Information

page 152

#1	10/14	Water Company
	10/17	Deposit
#2	10/18	Gift Shop
#3	10/23	Plumber
	10/25	ATM Withdrawal
#4	10/26	Babysitter
	10/28	Deposit
#5	10/31	Costume Rental

page 153

	8/1	Deposit
#1	8/5	Public Library
#2	8/8	Mechanic
	8/12	Credit
#3	8/16	Clothing Store
	8/17	ATM Withdrawal
	8/28	Fee
#4	8/29	Catering

page 154

	1/7	ATM Withdrawal
	1/15	Deposit
#1	1/16	Hardware Store
#2	1/20	Flower Shop
#3	1/22	Gas Station
#4	1/23	Shoe Repair
	1/24	Deposit
#5	1/31	Grocery Store

page 155

#36	5/2	Mortgage Payment
	5/4	Deposit
#37	5/4	Restaurant
	5/5	Debit Card
#38	5/7	Appliance Repair
	5/8	Deposit
#39	5/12	Postmaster
	5/15	ATM Withdrawal

page 156

#125	9/9	Music Shoppe
#126	9/14	Lumberyard
#127	9/22	Loan Payment
	9/24	ATM Deposit
#128	9/25	Lawn Care
#129	9/26	Grocery Store
#130	9/27	Park District
#131	9/30	Discount Store

ANSWER KEY

page 157

	3/16	Automatic Payment
#306	3/22	Cleaning Service
#307	3/31	Pizza Parlor
#308	4/6	Film Processing
	4/12	Deposit
#309	4/18	Hair Studio
#310	4/20	Chiropractor
#311	4/20	Pharmacy

page 158

#522	6/25	Condo Fee
	6/27	Deposit
#523	7/1	Cable Repair
#524	7/10	Fitness Class
	7/12	Deposit
	7/15	ATM Withdrawal
#525	7/19	Cash
#526	7/19	Dentist

Checking: Balancing Registers

page 159

Debit	Credit	Balance
		\$50.00
\$30.00		\$20.00
	\$100.00	\$120.00
\$50.00		\$70.00
\$15.00		\$55.00
\$20.00		\$35.00
	\$100.00	\$135.00
\$20.00		\$115.00
	\$15.00	\$130.00

page 160

Debit	Credit	Balance
		\$100.00
	\$75.50	\$175.50
\$5.00		\$170.50
\$20.75		\$149.75
	\$200.00	\$349.75
\$45.25		\$304.50
	\$175.50	\$480.00
\$10.75		\$469.25
\$5.00		\$464.25

page 161

Debit	Credit	Balance
		\$500.00
	\$783.00	\$1,283.00
\$57.00		\$1,226.00
\$15.75		\$1,210.25
\$46.25		\$1,164.00
\$10.00		\$1,154.00
\$23.50		\$1,130.50
\$187.00		\$943.50
	\$31.50	\$975.00

page 162

Debit	Credit	Balance
		\$387.47
\$26.04		\$361.43
\$117.12		\$244.31
	\$1,220.98	\$1,465.29
\$15.00		\$1,450.29
	\$76.32	\$1,526.61
\$192.25		\$1,334.36
\$43.81		\$1,290.55
\$550.11		\$740.44

page 163

Debit	Credit	Balance
		\$542.31
\$82.36		\$459.95
\$12.32		\$447.63
	\$475.00	\$922.63
\$52.36		\$870.27
\$15.00		\$855.27
	\$25.21	\$880.48
\$18.23		\$862.25
	\$109.14	\$971.39

page 164

Debit	Credit	Balance
		\$925.27
	\$58.75	\$984.02
\$142.36		\$841.66
\$2.00		\$839.66
\$68.10		\$771.56
	\$500.00	\$1,271.56
\$48.52		\$1,223.04
	\$60.50	\$1,283.54
\$32.93		\$1,250.61

page 165

Debit	Credit	Balance
		\$1,503.28
\$38.12		\$1,465.16
	\$500.00	\$1,965.16
\$82.16		\$1,883.00
	\$5.00	\$1,888.00
	\$50.00	\$1,938.00
\$13.50		\$1,924.50
\$22.19		\$1,902.31
	\$148.34	\$2,050.65

Checking: Organizing Registers

page 166

#	Date	Transaction	Debit	Fee	Credit	Balance
						\$500.00
50	6/12	Department Store (shoes)	\$38.19			\$461.81
51	6/12	Music Store (CD)	\$15.79			\$446.02
52	6/14	Cash	\$75.00			\$371.02
	6/15	Deposit			\$310.33	\$681.35
	6/21	ATM Deposit			\$50.00	\$731.35
	6/27	Fee		\$7.50		\$723.85
53	6/28	Pet Store (dog food)	\$23.58			\$700.27
54	6/30	Computer Store (ink cartridges)	\$62.04			\$638.23

ANSWER KEY

page 167

#	Date	Transaction	Debit	Fee	Credit	Balance
						\$693.21
	2/1	Fee (new checks)		\$20.00		\$673.21
87	2/4	Dance-N-Time (Feb. lessons)	\$36.00			\$637.21
	2/8	Corner Pharmacy	\$10.00			\$627.21
	2/13	Quick Fill (gasoline)	\$27.52			\$599.69
88	2/14	A. Floral (roses)	\$19.95			\$579.74
	2/15	Deposit			\$1,824.23	\$2,403.97
89	2/21	American Auto (car payment)	\$348.19			\$2,055.78
90	2/28	ACME Electric (Jan. bill)	\$179.38			\$1,876.40

page 168

#	Date	Transaction	Debit	Fee	Credit	Balance
						\$739.96
1329	12/2	Smith Electric (light fixtures)	\$210.40			\$529.56
	12/4	Direct Deposit			\$1,000.00	\$1,529.56
	12/9	ATM Withdrawal	\$20.00			\$1,509.56
1330	12/10	Campbell's Grocery	\$115.46			\$1,394.10
	12/16	Gasoline Station	\$31.23			\$1,362.87
1331	12/18	Chiropractor	\$75.00			\$1,287.87
1332	12/23	Cellular Connection (service plan)	\$62.38			\$1,225.49
	12/24	Bakery	\$28.32			\$1,197.17

page 169

#	Date	Transaction	Debit	Fee	Credit	Balance
						\$1,052.00
278	11/5	For Kid's (donation)	\$100.00			\$952.00
279	11/9	Candles and More	\$13.72			\$938.28
	11/10	Direct Deposit			\$250.00	\$1,188.28
280	11/11	ABC Hauling (garbage/recycling)	\$38.68			\$1,149.60
281	11/12	The Jewelry Box (necklace repair)	\$16.24			\$1,133.36
282	11/22	Edward's Farm (firewood delivery)	\$192.37			\$940.99
	11/23	Grocery Store	\$117.85			\$823.14
	11/29	ATM Withdrawal	\$20.00			\$803.14

page 170

#	Date	Transaction	Debit	Fee	Credit	Balance
						\$957.16
101	9/2	City Bank (car payment)	\$310.00			\$647.16
	9/7	Deposit			\$1,572.83	\$2,219.99
	9/12	ATM Withdrawal	\$50.00			\$2,169.99
	9/14	Fee		\$5.00		\$2,164.99
102	9/18	Grocery Store	\$93.98			\$2,071.01
103	9/20	Carpet Magic (upholstery repair)	\$67.26			\$2,003.75
	9/21	Credit			\$8.74	\$2,012.49
104	9/24	City Bank (mortgage payment)	\$421.32			\$1,591.17

ANSWER KEY

page 171

#	Date	Transaction	Debit	Fee	Credit	Balance
						\$870.53
1387	3/24	Insurance Inc.	\$172.86			\$697.67
1388	3/24	Camp Sunshine (contribution)	\$25.00			\$672.67
	3/26	Direct Deposit			\$1,531.37	\$2,204.04
1389	3/28	Times (newspaper)	\$67.15			\$2,136.89
1390	3/29	Hardware Store (paint)	\$19.12			\$2,117.77
	3/30	ATM Withdrawal	\$100.00			\$2,017.77
1391	3/31	<i>On With the Show</i> (theater tickets)	\$52.75			\$1,965.02
1392	3/31	Ray's Locksmith	\$42.43			\$1,922.59

page 172

#	Date	Transaction	Debit	Fee	Credit	Balance
						\$859.87
101	4/15	Toy Store (birthday gift)	\$17.62			\$842.25
102	4/20	Country Club (monthly dues)	\$100.00			\$742.25
103	4/20	Health Club (monthly fee)	\$55.00			\$687.25
	4/29	Deposit			\$372.50	\$1,059.75
104	5/1	TV Repair Service	\$45.00			\$1,014.75
105	5/4	Grocery Store	\$72.51			\$942.24
	5/13	Automatic Deposit			\$998.03	\$1,940.27
106	5/20	Dentist (cleaning)	\$65.00			\$1,875.27

26-07-98765432